

© International Baccalaureate Organization 2024

All rights reserved. No part of this product may be reproduced in any form or by any electronic or mechanical means, including information storage and retrieval systems, without the prior written permission from the IB. Additionally, the license tied with this product prohibits use of any selected files or extracts from this product. Use by third parties, including but not limited to publishers, private teachers, tutoring or study services, preparatory schools, vendors operating curriculum mapping services or teacher resource digital platforms and app developers, whether fee-covered or not, is prohibited and is a criminal offense.

More information on how to request written permission in the form of a license can be obtained from <https://ibo.org/become-an-ib-school/ib-publishing/licensing/applying-for-a-license/>.

© Organisation du Baccalauréat International 2024

Tous droits réservés. Aucune partie de ce produit ne peut être reproduite sous quelque forme ni par quelque moyen que ce soit, électronique ou mécanique, y compris des systèmes de stockage et de récupération d'informations, sans l'autorisation écrite préalable de l'IB. De plus, la licence associée à ce produit interdit toute utilisation de tout fichier ou extrait sélectionné dans ce produit. L'utilisation par des tiers, y compris, sans toutefois s'y limiter, des éditeurs, des professeurs particuliers, des services de tutorat ou d'aide aux études, des établissements de préparation à l'enseignement supérieur, des fournisseurs de services de planification des programmes d'études, des gestionnaires de plateformes pédagogiques en ligne, et des développeurs d'applications, moyennant paiement ou non, est interdite et constitue une infraction pénale.

Pour plus d'informations sur la procédure à suivre pour obtenir une autorisation écrite sous la forme d'une licence, rendez-vous à l'adresse <https://ibo.org/become-an-ib-school/ib-publishing/licensing/applying-for-a-license/>.

© Organización del Bachillerato Internacional, 2024

Todos los derechos reservados. No se podrá reproducir ninguna parte de este producto de ninguna forma ni por ningún medio electrónico o mecánico, incluidos los sistemas de almacenamiento y recuperación de información, sin la previa autorización por escrito del IB. Además, la licencia vinculada a este producto prohíbe el uso de todo archivo o fragmento seleccionado de este producto. El uso por parte de terceros —lo que incluye, a título enunciativo, editoriales, profesores particulares, servicios de apoyo académico o ayuda para el estudio, colegios preparatorios, desarrolladores de aplicaciones y entidades que presten servicios de planificación curricular u ofrezcan recursos para docentes mediante plataformas digitales—, ya sea incluido en tasas o no, está prohibido y constituye un delito.

En este enlace encontrará más información sobre cómo solicitar una autorización por escrito en forma de licencia: <https://ibo.org/become-an-ib-school/ib-publishing/licensing/applying-for-a-license/>.

Chemistry

Standard level

Paper 1

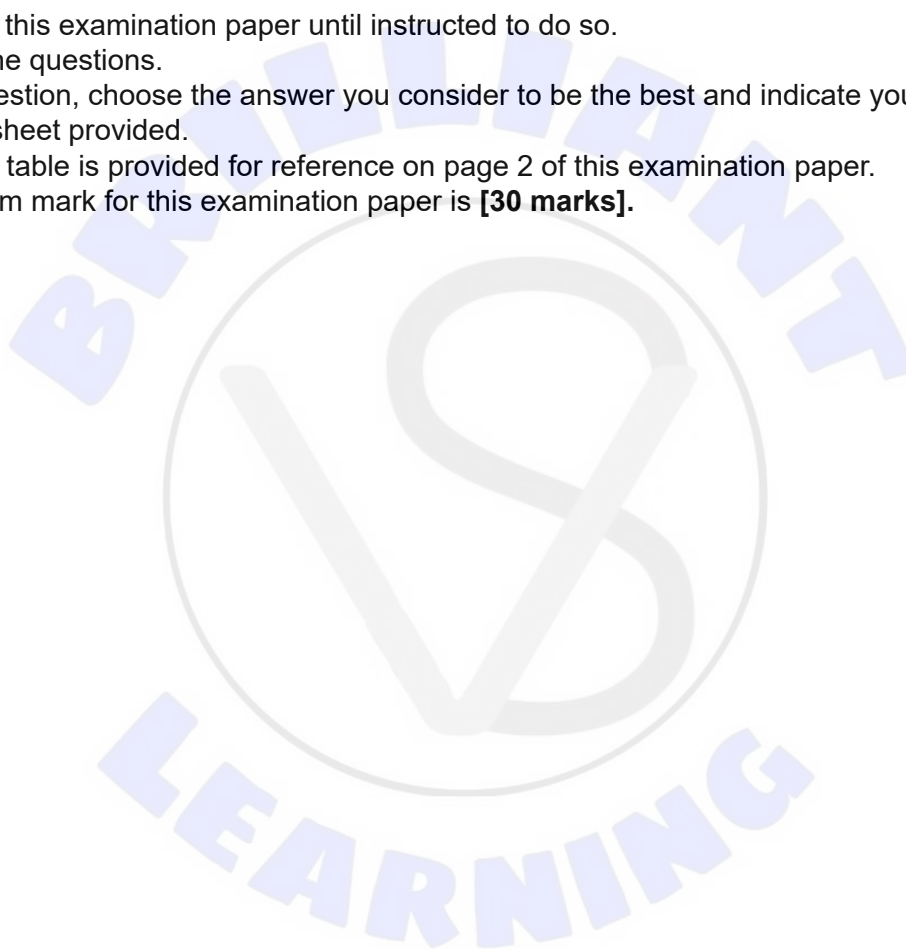
8 May 2024

Zone A afternoon | Zone B afternoon | Zone C afternoon

45 minutes

Instructions to candidates

- Do not open this examination paper until instructed to do so.
- Answer all the questions.
- For each question, choose the answer you consider to be the best and indicate your choice on the answer sheet provided.
- The periodic table is provided for reference on page 2 of this examination paper.
- The maximum mark for this examination paper is **[30 marks]**.

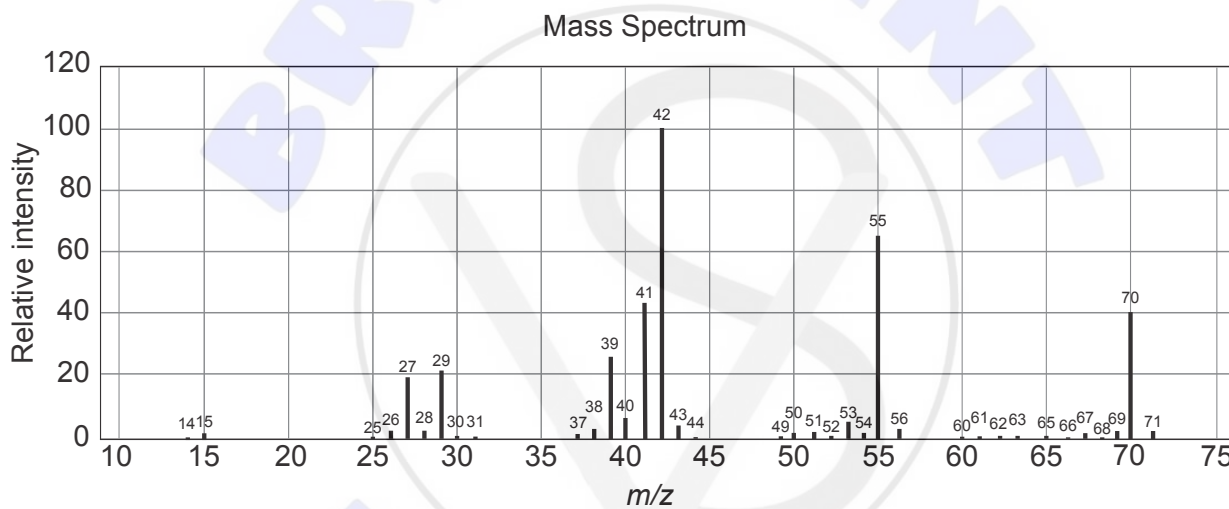


1. Which descriptions of a chemical compound are correct?

- I. Contains atoms of more than one element.
- II. Atoms retain their individual properties.
- III. Atoms are in fixed ratios.

- A. I and II only
- B. I and III only
- C. II and III only
- D. I, II and III

2. What is the molecular formula of the compound with empirical formula CH_2 and the following mass spectrum?

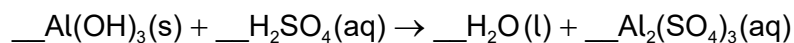


[Source: Used with permission. © United States of America as represented by the Secretary of Commerce.]

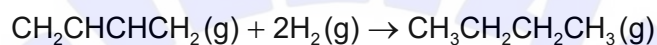
- A. C_2H_4
- B. C_3H_6
- C. C_4H_8
- D. C_5H_{10}

Turn over

3. What is the sum of the coefficients when the equation is balanced with the smallest whole numbers?



- A. 8
 B. 9
 C. 11
 D. 12
4. Which species are present after 15 dm³ of buta-1,3-diene has reacted with 18 dm³ of hydrogen to produce butane?

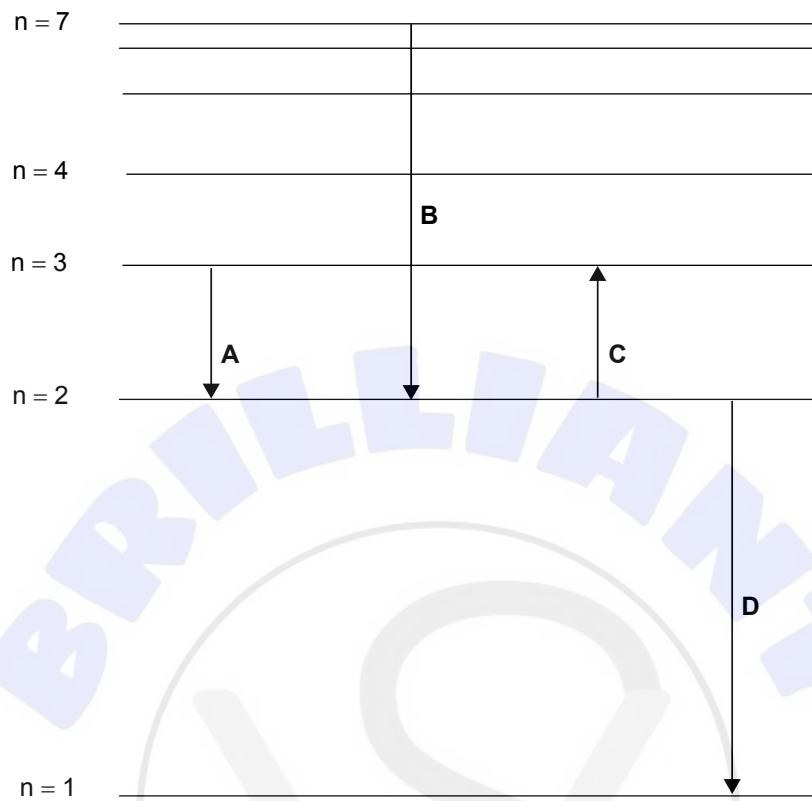


- A. 9 dm³ of butane and 6 dm³ of hydrogen
 B. 9 dm³ of butane and 6 dm³ of buta-1,3-diene
 C. 15 dm³ of butane and 3 dm³ of hydrogen
 D. 18 dm³ of butane and 3 dm³ of buta-1,3-diene
5. What is the correct number of subatomic particles for $^{79}_{34}\text{Se}^{2-}$?

	Protons	Electrons	Neutrons
A.	34	36	79
B.	34	36	45
C.	36	45	36
D.	79	81	34

6. Which electron transition corresponds to the red line in the hydrogen line emission spectrum?

diagram not to scale



7. Which element is an actinoid?

- A. Rf
- B. Ra
- C. Pr
- D. Pa

8. Which oxide produces an aqueous solution with the highest pH?

- A. Na_2O
- B. P_4O_{10}
- C. NO_2
- D. CO_2

Turn over

9. What is the correct formula for ammonium phosphate?

- A. NH_4PO_4
- B. $(\text{NH}_4)_2\text{PO}_4$
- C. $(\text{NH}_4)_3\text{PO}_4$
- D. $(\text{NH}_3)_3\text{PO}_4$

10. Which bond is the most polar?

- A. C–H
- B. N–H
- C. O–H
- D. F–H

11. Which species have resonance structures?

- I. CH_2CHCH_3
- II. O_3
- III. NO_3^-

- A. I and II only
- B. I and III only
- C. II and III only
- D. I, II and III


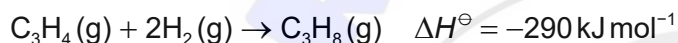
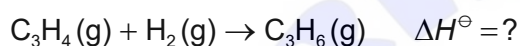
12. Which combination best describes NO_2^- ?

	Number of electron domains around N	Molecular geometry	Bond angle
A.	2	linear	180°
B.	3	bent	105°
C.	3	bent	117°
D.	4	trigonal planar	120°

13. How much heat energy, in J, does a 2.00 g block of copper metal at 65.0 °C lose when it is dropped into 100.0 cm³ of water and cools to 15.0 °C?

The specific heat capacity of copper is 0.385 Jg⁻¹K⁻¹ and the specific heat capacity of water is 4.18 Jg⁻¹K⁻¹.

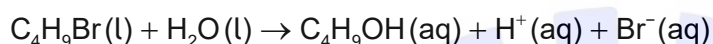
- A. $2.00 \times 0.385 \times (65.0 - 15.0)$
 B. $2.00 \times 0.385 \times (65.0 - 15.0 + 273)$
 C. $100.0 \times 4.18 \times (65.0 - 15.0)$
 D. $100.0 \times 4.18 \times (65.0 - 15.0 + 273)$
14. What is the enthalpy change of reaction, ΔH^\ominus in kJ mol⁻¹, for the hydrogenation of propyne to propene?



- A. $(-290) + (-125)$
 B. $(-290) - (-125)$
 C. $-(-290) + (-125)$
 D. $-(-290) - (-125)$
15. What is the correct formula for calculating enthalpy change of reaction, ΔH^\ominus reaction?
- A. $\Delta H^\ominus \text{ reaction} = \sum \Delta H_f^\ominus \text{ reactants} - \sum \Delta H_f^\ominus \text{ products}$
 B. $\Delta H^\ominus \text{ reaction} = \sum \Delta H_c^\ominus \text{ products} - \sum \Delta H_c^\ominus \text{ reactants}$
 C. $\Delta H^\ominus \text{ reaction} = \sum \Delta H_{\text{bonds}}^\ominus \text{ reactants} - \sum \Delta H_{\text{bonds}}^\ominus \text{ products}$
 D. $\Delta H^\ominus \text{ reaction} = \sum \Delta H_{\text{bonds}}^\ominus \text{ products} - \sum \Delta H_{\text{bonds}}^\ominus \text{ reactants}$

16. Which change would decrease the rate of reaction between magnesium ribbon and hydrochloric acid?
- A. increasing the length of the magnesium ribbon
 - B. increasing the temperature of the acid
 - C. cutting the magnesium ribbon into smaller pieces
 - D. adding water to the hydrochloric acid

17. Which methods could be used to determine the rate of this reaction?

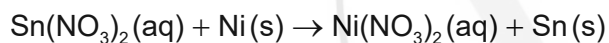
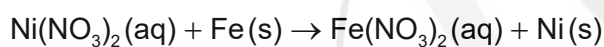
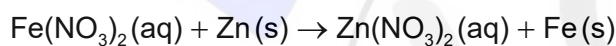


- I. change in pH
 - II. change in electrical conductivity
 - III. change in mass
- A. I and II only
 - B. I and III only
 - C. II and III only
 - D. I, II and III
18. The equilibrium constant for $\text{N}_2\text{O}_4(\text{g}) \rightleftharpoons 2\text{NO}_2(\text{g})$ is $K_c = 0.0059$ at 298 K.
- What is the value of the equilibrium constant at 298 K for $4\text{NO}_2(\text{g}) \rightleftharpoons 2\text{N}_2\text{O}_4(\text{g})$?
- A. $\frac{1}{0.0059}$
 - B. $\frac{1}{0.0059^2}$
 - C. 0.0059
 - D. 0.0059^2

19. Which products form in the reaction between sulfuric acid and sodium hydrogencarbonate?
- A. $\text{NaSO}_4 + \text{CO}_2$
 - B. $\text{Na}_2\text{SO}_4 + \text{H}_2\text{O} + \text{CO}_2$
 - C. $\text{Na}_2\text{SO}_4 + \text{CO}_2$
 - D. $\text{NaSO}_4 + \text{H}_2\text{O} + \text{CO}_2$

20. What is the pH change when $0.100 \text{ mol dm}^{-3} \text{ HCl (aq)}$ is diluted to $0.00100 \text{ mol dm}^{-3}$?
- A. increases by 2
 - B. increases by 1
 - C. decreases by 1
 - D. decreases by 2

21. The following equations represent reactions that occur spontaneously.



What is the increasing order of activity of the metals?

- A. $\text{Zn} < \text{Fe} < \text{Ni} < \text{Sn}$
 - B. $\text{Sn} < \text{Fe} < \text{Ni} < \text{Zn}$
 - C. $\text{Sn} < \text{Ni} < \text{Fe} < \text{Zn}$
 - D. $\text{Ni} < \text{Sn} < \text{Zn} < \text{Fe}$
22. Which statement is correct for a voltaic cell?
- A. Reduction occurs at the negative electrode.
 - B. Electrical energy is converted to chemical energy.
 - C. The anode is the positive electrode.
 - D. Reduction occurs at the cathode.

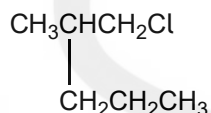
Turn over

23. What are the products of the electrolysis of molten magnesium chloride, $\text{MgCl}_2(\text{l})$?
- $\text{Mg}^{2+}(\text{l}) + 2\text{Cl}^{-}(\text{l})$
 - $\text{Mg}^{2+}(\text{l}) + \text{Cl}_2(\text{g})$
 - $\text{Mg}(\text{l}) + \text{Cl}_2(\text{g})$
 - $\text{Mg}(\text{l}) + 2\text{Cl}^{-}(\text{l})$

24. Which compounds belong to the same homologous series?

- CH_3CH_3 , $\text{CH}_3\text{CH}_2\text{CH}_3$, $\text{CH}_3\text{CHCHCH}_3$
- CH_3CHCH_2 , $\text{CH}_3\text{CH}_2\text{CHCH}_2$, $\text{CH}_2\text{CHCH}(\text{CH}_3)_2$
- CH_3OH , HCHO , HCOOH
- $\text{CH}_3\text{CH}_2\text{CHO}$, $(\text{CH}_3)_2\text{CO}$, CH_3CHO

25. What is the name of this compound?



- 1-chloro-2-propylpropane
 - 1-chloro-2-methylpentane
 - 2-propyl-3-chloropropane
 - 1-chlorohexane
26. What is the organic product when $(\text{CH}_3)_2\text{CH}(\text{OH})$ and acidified potassium manganate (VII), $\text{H}^+/\text{KMnO}_4(\text{aq})$, are heated together?
- $\text{CH}_3\text{CH}_2\text{COOH}$
 - $(\text{CH}_3)_2\text{CO}$
 - $(\text{CH}_3)_2\text{CH}(\text{OH})$
 - $\text{CH}_3\text{CH}_2\text{CHO}$

27. Which products may be formed during incomplete combustion of octane?
- A. CO_2 and H_2
 - B. CO and H_2
 - C. CO and H_2O
 - D. C , CO and H_2
28. 50.0 cm^3 samples of water measured using a graduated cylinder were found to weigh 48.88, 48.89 and 48.86 grams. Water has a density of 1.00 g cm^{-3} .
- What is the best description of the measurements?
- A. accurate and precise
 - B. accurate but not precise
 - C. precise but not accurate
 - D. neither accurate nor precise
29. A 50.0 cm^3 sample of sodium hydroxide solution, $\text{NaOH}(\text{aq})$, weighed 53.894 g at 25°C . What is the density of the solution in g cm^{-3} ?
- A. 1.08
 - B. 1.078
 - C. 1.0779
 - D. 1.07788
30. Which region of the electromagnetic spectrum is used in ^1H NMR spectroscopy?
- A. X-ray
 - B. ultraviolet
 - C. infrared
 - D. radio waves



Disclaimer:

Content used in IB assessments is taken from authentic, third-party sources. The views expressed within them belong to their individual authors and/or publishers and do not necessarily reflect the views of the IB.

References:

2. Used with permission. © United States of America as represented by the Secretary of Commerce.

All other texts, graphics and illustrations © International Baccalaureate Organization 2024