

© International Baccalaureate Organization 2024

All rights reserved. No part of this product may be reproduced in any form or by any electronic or mechanical means, including information storage and retrieval systems, without the prior written permission from the IB. Additionally, the license tied with this product prohibits use of any selected files or extracts from this product. Use by third parties, including but not limited to publishers, private teachers, tutoring or study services, preparatory schools, vendors operating curriculum mapping services or teacher resource digital platforms and app developers, whether fee-covered or not, is prohibited and is a criminal offense.

More information on how to request written permission in the form of a license can be obtained from <https://ibo.org/become-an-ib-school/ib-publishing/licensing/applying-for-a-license/>.

© Organisation du Baccalauréat International 2024

Tous droits réservés. Aucune partie de ce produit ne peut être reproduite sous quelque forme ni par quelque moyen que ce soit, électronique ou mécanique, y compris des systèmes de stockage et de récupération d'informations, sans l'autorisation écrite préalable de l'IB. De plus, la licence associée à ce produit interdit toute utilisation de tout fichier ou extrait sélectionné dans ce produit. L'utilisation par des tiers, y compris, sans toutefois s'y limiter, des éditeurs, des professeurs particuliers, des services de tutorat ou d'aide aux études, des établissements de préparation à l'enseignement supérieur, des fournisseurs de services de planification des programmes d'études, des gestionnaires de plateformes pédagogiques en ligne, et des développeurs d'applications, moyennant paiement ou non, est interdite et constitue une infraction pénale.

Pour plus d'informations sur la procédure à suivre pour obtenir une autorisation écrite sous la forme d'une licence, rendez-vous à l'adresse <https://ibo.org/become-an-ib-school/ib-publishing/licensing/applying-for-a-license/>.

© Organización del Bachillerato Internacional, 2024

Todos los derechos reservados. No se podrá reproducir ninguna parte de este producto de ninguna forma ni por ningún medio electrónico o mecánico, incluidos los sistemas de almacenamiento y recuperación de información, sin la previa autorización por escrito del IB. Además, la licencia vinculada a este producto prohíbe el uso de todo archivo o fragmento seleccionado de este producto. El uso por parte de terceros —lo que incluye, a título enunciativo, editoriales, profesores particulares, servicios de apoyo académico o ayuda para el estudio, colegios preparatorios, desarrolladores de aplicaciones y entidades que presten servicios de planificación curricular u ofrezcan recursos para docentes mediante plataformas digitales—, ya sea incluido en tasas o no, está prohibido y constituye un delito.

En este enlace encontrará más información sobre cómo solicitar una autorización por escrito en forma de licencia: <https://ibo.org/become-an-ib-school/ib-publishing/licensing/applying-for-a-license/>.

Mathematics: analysis and approaches
Higher level
Paper 1

1 May 2024

Zone A afternoon | **Zone B** afternoon | **Zone C** afternoon

Candidate session number

2 hours

--	--	--	--	--	--	--	--	--	--

Instructions to candidates

- Write your session number in the boxes above.
- Do not open this examination paper until instructed to do so.
- You are not permitted access to any calculator for this paper.
- Section A: answer all questions. Answers must be written within the answer boxes provided.
- Section B: answer all questions in the answer booklet provided. Fill in your session number on the front of the answer booklet, and attach it to this examination paper and your cover sheet using the tag provided.
- Unless otherwise stated in the question, all numerical answers should be given exactly or correct to three significant figures.
- A clean copy of the **mathematics: analysis and approaches HL formula booklet** is required for this paper.
- The maximum mark for this examination paper is **[110 marks]**.



Full marks are not necessarily awarded for a correct answer with no working. Answers must be supported by working and/or explanations. Where an answer is incorrect, some marks may be given for a correct method, provided this is shown by written working. You are therefore advised to show all working.

Section A

Answer **all** questions. Answers must be written within the answer boxes provided. Working may be continued below the lines, if necessary.

1. [Maximum mark: 6]

Claire rolls a six-sided die 16 times.

The scores obtained are shown in the following frequency table.

Score	Frequency
1	p
2	q
3	4
4	2
5	0
6	3

It is given that the mean score is 3.

(a) Find the value of p and the value of q . [5]

Each of Claire's scores is multiplied by 10 in order to determine the final score for a game she is playing.

(b) Write down the mean final score. [1]

.....

.....

.....

.....

.....

.....

.....

.....

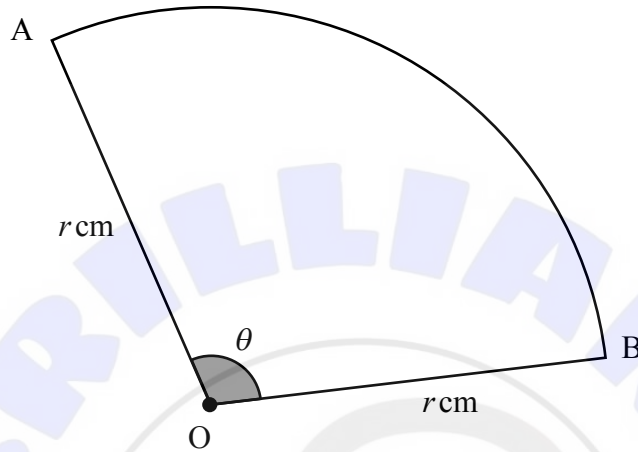


3. [Maximum mark: 8]

Points A and B lie on the circumference of a circle of radius r cm with centre at O.

The sector OAB is shown on the following diagram. The angle \widehat{AOB} is denoted as θ and is measured in radians.

diagram not to scale



The perimeter of the sector is 10 cm and the area of the sector is 6.25 cm^2 .

- (a) Show that $4r^2 - 20r + 25 = 0$. [4]
- (b) Hence, or otherwise, find the value of r and the value of θ . [4]

.....

.....

.....

.....

.....

.....

.....

.....

.....

.....

.....

.....

.....

.....

.....

.....

.....

.....

.....

.....

.....

.....

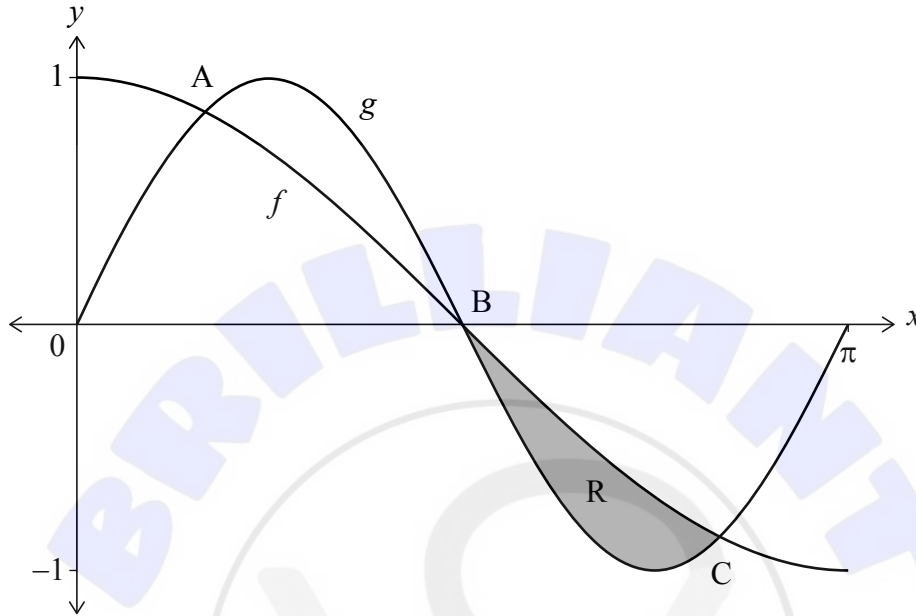
.....



4. [Maximum mark: 7]

Consider the functions $f(x) = \cos x$ and $g(x) = \sin 2x$, where $0 \leq x \leq \pi$.

The graph of f intersects the graph of g at the point A, the point B $\left(\frac{\pi}{2}, 0\right)$ and the point C as shown on the following diagram.



(a) Find the x -coordinate of point A and the x -coordinate of point C. [3]

The shaded region R is enclosed by the graph of f and the graph of g between the points B and C.

(b) Find the area of R. [4]

.....

.....

.....

.....

.....

.....

.....

.....

.....

.....

.....

.....

.....

.....

.....

.....

.....

.....

.....

.....

.....

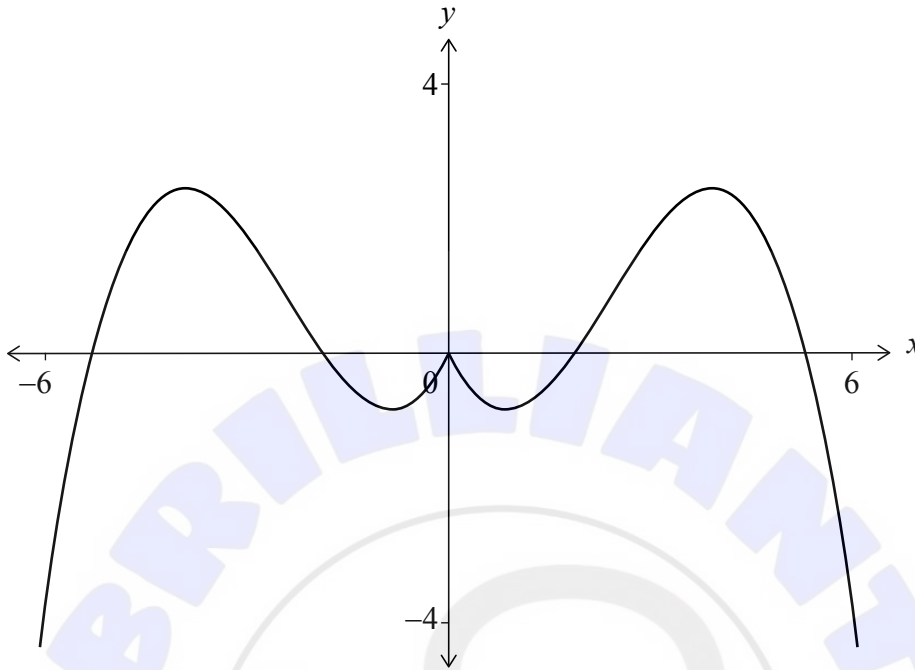
.....

.....



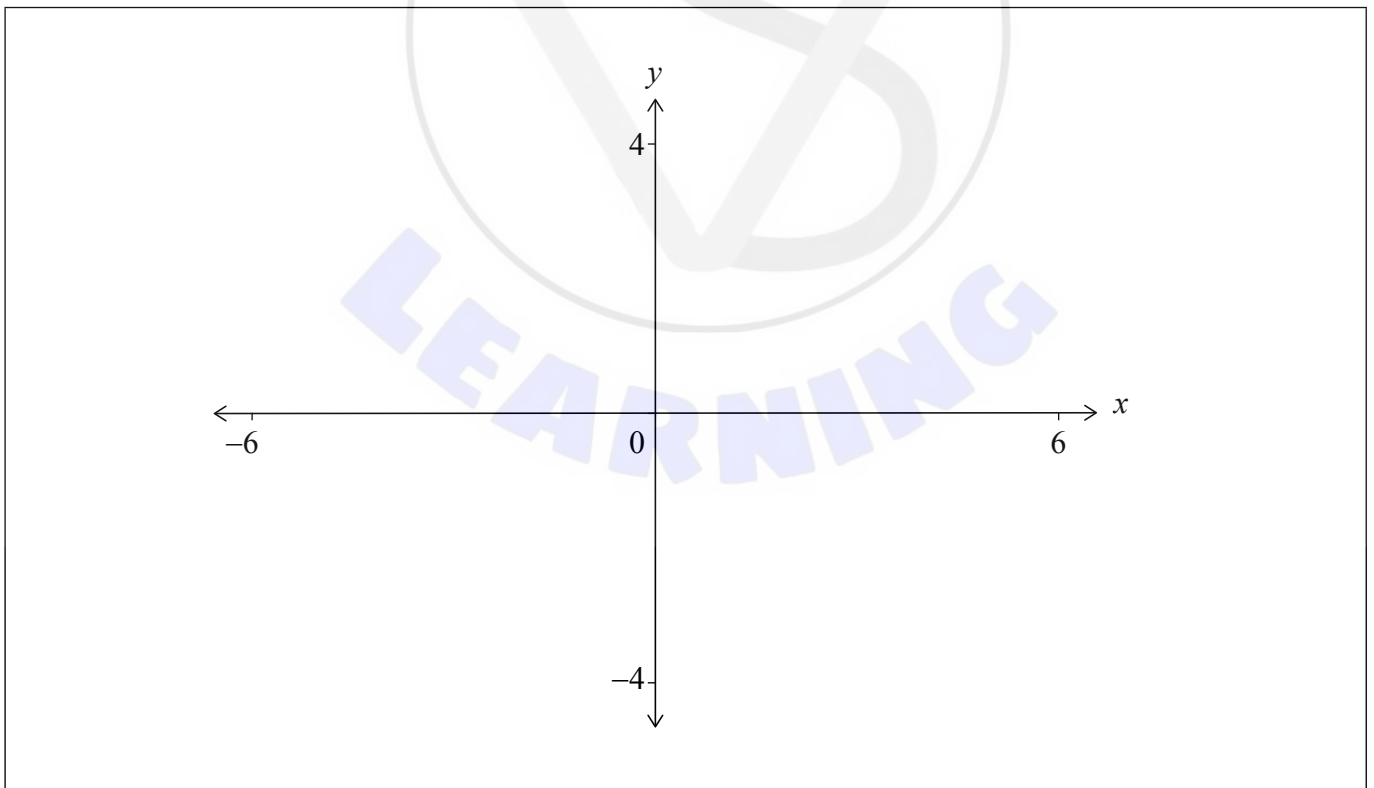
9. [Maximum mark: 6]

The graph of $y = f(|x|)$ for $-6 \leq x \leq 6$ is shown in the following diagram.



(a) On the following axes, sketch the graph of $y = |f(|x|)|$ for $-6 \leq x \leq 6$.

[2]



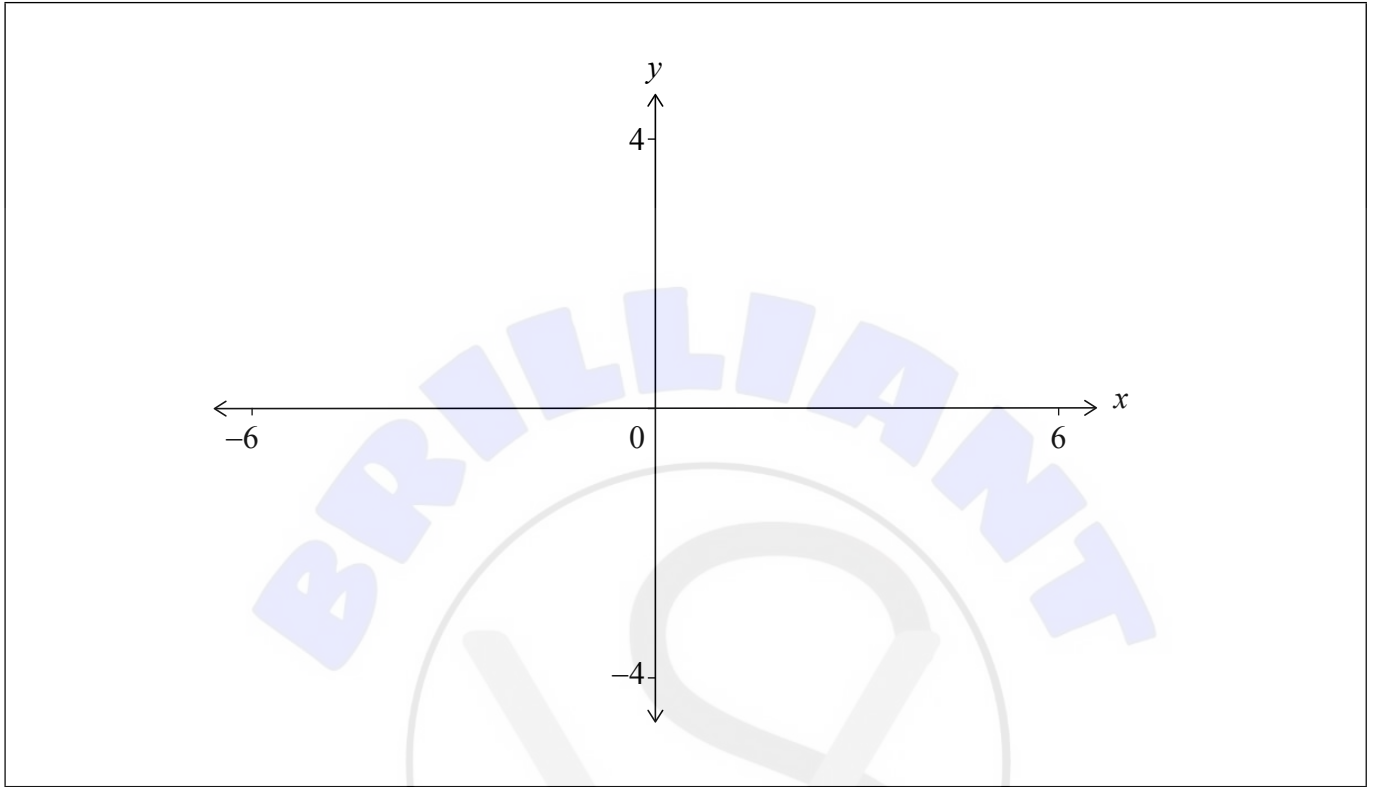
(This question continues on the following page)



(Question 9 continued)

It is given that f is an odd function.

- (b) On the following axes, sketch the graph of $y = f(x)$ for $-6 \leq x \leq 6$. [2]



It is also given that $\int_0^4 f(|x|) dx = 1.6$.

(c) Write down the value of

(i) $\int_{-4}^0 f(x) dx$;

(ii) $\int_{-4}^4 (f(|x|) + f(x)) dx$.

[2]

.....
.....
.....
.....
.....
.....
.....
.....



Do **not** write solutions on this page.

Section B

Answer **all** questions in the answer booklet provided. Please start each question on a new page.

10. [Maximum mark: 16]

Consider the function $f(x) = \frac{4x+2}{x-2}$, $x \neq 2$.

- (a) Sketch the graph of $y = f(x)$. On your sketch, indicate the values of any axis intercepts and label any asymptotes with their equations. [5]
- (b) Write down the range of f . [1]

Consider the function $g(x) = x^2 + bx + c$. The graph of g has an axis of symmetry at $x = 2$.

The two roots of $g(x) = 0$ are $-\frac{1}{2}$ and p , where $p \in \mathbb{Q}$.

- (c) Show that $p = \frac{9}{2}$. [1]
- (d) Find the value of b and the value of c . [3]
- (e) Find the y -coordinate of the vertex of the graph of $y = g(x)$. [2]
- (f) Find the product of the solutions of the equation $f(x) = g(x)$. [4]



Do **not** write solutions on this page.

11. [Maximum mark: 17]

Consider the polynomial $P(x) = 3x^3 + 5x^2 + x - 1$.

(a) Show that $(x + 1)$ is a factor of $P(x)$. [2]

(b) Hence, express $P(x)$ as a product of three linear factors. [3]

Now consider the polynomial $Q(x) = (x + 1)(2x + 1)$.

(c) Express $\frac{1}{Q(x)}$ in the form $\frac{A}{x+1} + \frac{B}{2x+1}$, where $A, B \in \mathbb{Z}$. [3]

(d) Hence, or otherwise, show that $\frac{1}{(x+1)Q(x)} = \frac{4}{2x+1} - \frac{2}{x+1} - \frac{1}{(x+1)^2}$. [2]

(e) Hence, find $\int \frac{1}{(x+1)^2(2x+1)} dx$. [4]

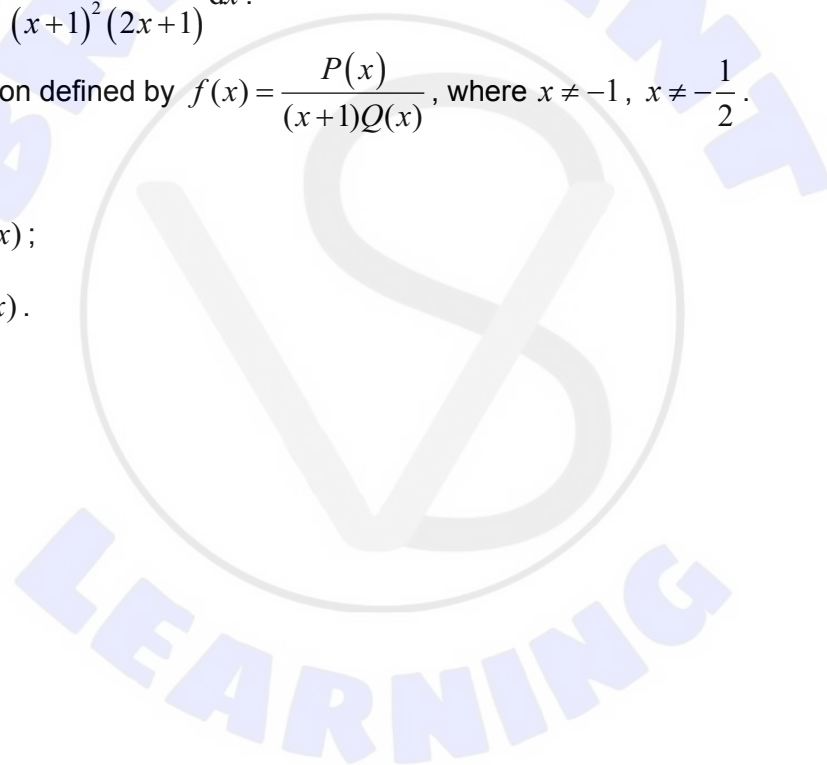
Consider the function defined by $f(x) = \frac{P(x)}{(x+1)Q(x)}$, where $x \neq -1$, $x \neq -\frac{1}{2}$.

(f) Find

(i) $\lim_{x \rightarrow -1} f(x)$;

(ii) $\lim_{x \rightarrow \infty} f(x)$.

[3]



Do **not** write solutions on this page.

12. [Maximum mark: 20]

Consider $\phi = (a + bi)^3$, where $a, b \in \mathbb{R}$.

(a) In terms of a and b , find

(i) the real part of ϕ ;

(ii) the imaginary part of ϕ .

[3]

(b) Hence, or otherwise, show that $(1 + \sqrt{3}i)^3 = -8$.

[2]

The roots of the equation $z^3 = -8$ are u, v and w , where $u = 1 + \sqrt{3}i$ and $v \in \mathbb{R}$.

(c) Write down v and w , giving your answers in Cartesian form.

[2]

On an Argand diagram, u, v and w are represented by the points U, V and W respectively.

(d) Find the area of the triangle UVW .

[3]

Each of the points U, V and W is rotated counter-clockwise (anticlockwise) about 0 through an angle of $\frac{\pi}{4}$ to form three new points U', V' and W' . These points represent the complex numbers u', v' and w' respectively.

(e) Find u', v' and w' , giving your answers in the form $re^{i\theta}$, where $-\pi < \theta \leq \pi$.

[4]

(f) Given that u', v' and w' are the solutions of $z^3 = c + di$, where $c, d \in \mathbb{R}$, find the value of c and the value of d .

[3]

It is given that u, v, w, u', v' and w' are all solutions of $z^n = \alpha$ for some $\alpha \in \mathbb{C}$, where $n \in \mathbb{N}$.

(g) Find the smallest positive value of n .

[3]

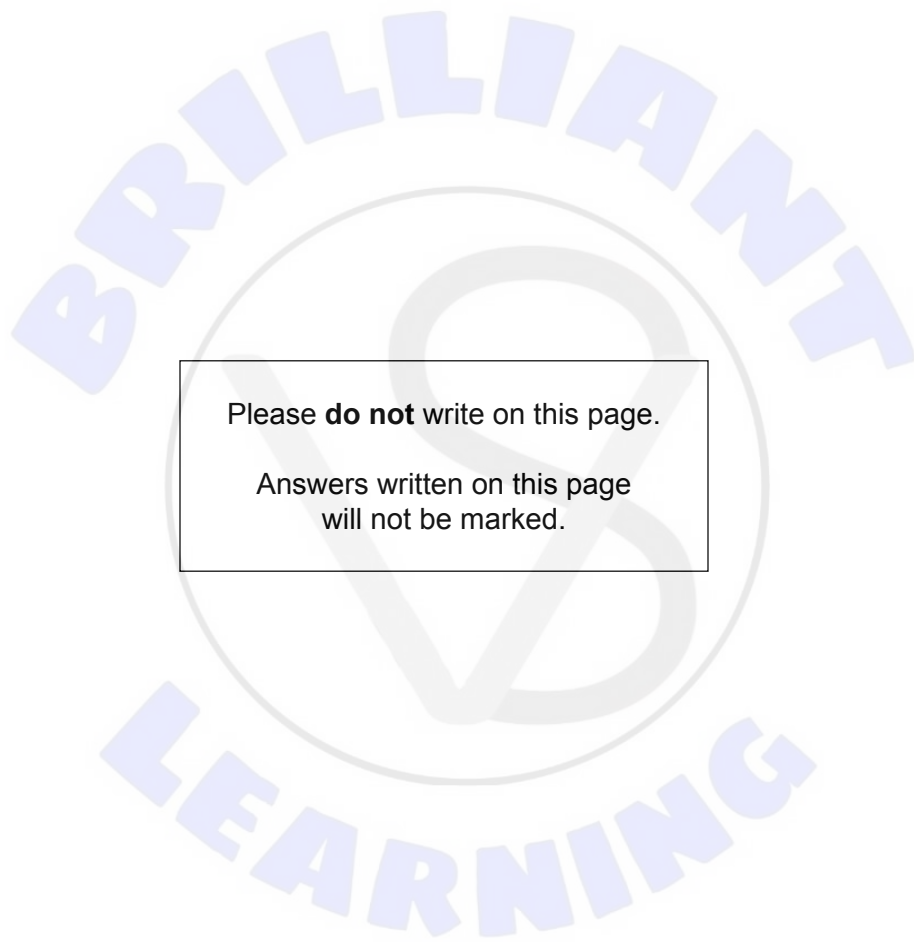




Please **do not** write on this page.

Answers written on this page
will not be marked.





Please **do not** write on this page.

Answers written on this page
will not be marked.

