

© International Baccalaureate Organization 2024

All rights reserved. No part of this product may be reproduced in any form or by any electronic or mechanical means, including information storage and retrieval systems, without the prior written permission from the IB. Additionally, the license tied with this product prohibits use of any selected files or extracts from this product. Use by third parties, including but not limited to publishers, private teachers, tutoring or study services, preparatory schools, vendors operating curriculum mapping services or teacher resource digital platforms and app developers, whether fee-covered or not, is prohibited and is a criminal offense.

More information on how to request written permission in the form of a license can be obtained from <https://ibo.org/become-an-ib-school/ib-publishing/licensing/applying-for-a-license/>.

© Organisation du Baccalauréat International 2024

Tous droits réservés. Aucune partie de ce produit ne peut être reproduite sous quelque forme ni par quelque moyen que ce soit, électronique ou mécanique, y compris des systèmes de stockage et de récupération d'informations, sans l'autorisation écrite préalable de l'IB. De plus, la licence associée à ce produit interdit toute utilisation de tout fichier ou extrait sélectionné dans ce produit. L'utilisation par des tiers, y compris, sans toutefois s'y limiter, des éditeurs, des professeurs particuliers, des services de tutorat ou d'aide aux études, des établissements de préparation à l'enseignement supérieur, des fournisseurs de services de planification des programmes d'études, des gestionnaires de plateformes pédagogiques en ligne, et des développeurs d'applications, moyennant paiement ou non, est interdite et constitue une infraction pénale.

Pour plus d'informations sur la procédure à suivre pour obtenir une autorisation écrite sous la forme d'une licence, rendez-vous à l'adresse <https://ibo.org/become-an-ib-school/ib-publishing/licensing/applying-for-a-license/>.

© Organización del Bachillerato Internacional, 2024

Todos los derechos reservados. No se podrá reproducir ninguna parte de este producto de ninguna forma ni por ningún medio electrónico o mecánico, incluidos los sistemas de almacenamiento y recuperación de información, sin la previa autorización por escrito del IB. Además, la licencia vinculada a este producto prohíbe el uso de todo archivo o fragmento seleccionado de este producto. El uso por parte de terceros —lo que incluye, a título enunciativo, editoriales, profesores particulares, servicios de apoyo académico o ayuda para el estudio, colegios preparatorios, desarrolladores de aplicaciones y entidades que presten servicios de planificación curricular u ofrezcan recursos para docentes mediante plataformas digitales—, ya sea incluido en tasas o no, está prohibido y constituye un delito.

En este enlace encontrará más información sobre cómo solicitar una autorización por escrito en forma de licencia: <https://ibo.org/become-an-ib-school/ib-publishing/licensing/applying-for-a-license/>.

Physics

Standard level

Paper 1

25 April 2024

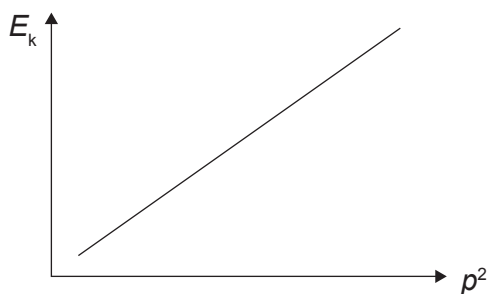
Zone A afternoon | Zone B afternoon | Zone C afternoon

45 minutes

Instructions to candidates

- Do not open this examination paper until instructed to do so.
- Answer all the questions.
- For each question, choose the answer you consider to be the best and indicate your choice on the answer sheet provided.
- A clean copy of the **physics data booklet** is required for this paper.
- The maximum mark for this examination paper is **[30 marks]**.

1. The graph shows the variation of kinetic energy E_k with momentum squared p^2 .



What are the fundamental SI units for the gradient of the graph?

- A. kg^{-1}
 - B. kg
 - C. Jm^2s^{-2}
 - D. Jms^{-1}
2. A cart accelerates from $(20 \pm 1)\text{ms}^{-1}$ to $(30 \pm 1)\text{ms}^{-1}$.

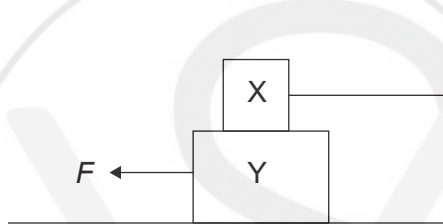
What is the percentage uncertainty in the change of speed of the cart?

- A. 2%
- B. 4%
- C. 8%
- D. 20%

3. Jim runs with a constant velocity v past Sally who is at rest. At this instant, Sally begins to chase Jim with constant acceleration a .

Which expression gives the time Sally will catch Jim?

- A. $\frac{v}{2a}$
- B. $\frac{v}{a}$
- C. $\frac{2v}{a}$
- D. $\frac{4v}{a}$
4. A block X of weight 10 N is stacked on a block Y of weight 20 N. Block X is fixed to a wall with a light string. The coefficients of static friction between the blocks and between block Y and the ground are both 0.2.




What is the value of the minimum force F required to move block Y and what is the tension T in the string immediately before block Y begins to move?

	Minimum force F/N	Tension in string T/N
A.	8	2
B.	8	6
C.	6	2
D.	6	6

Turn over

5. A ball is thrown from an aircraft in flight.

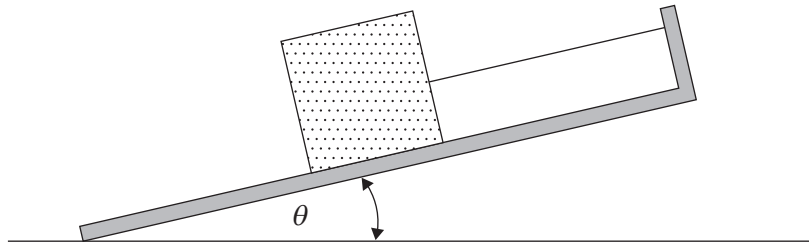


Which of the following shows the correct free-body diagram for the forces acting on the ball when terminal velocity is reached?

A. B. C. D.

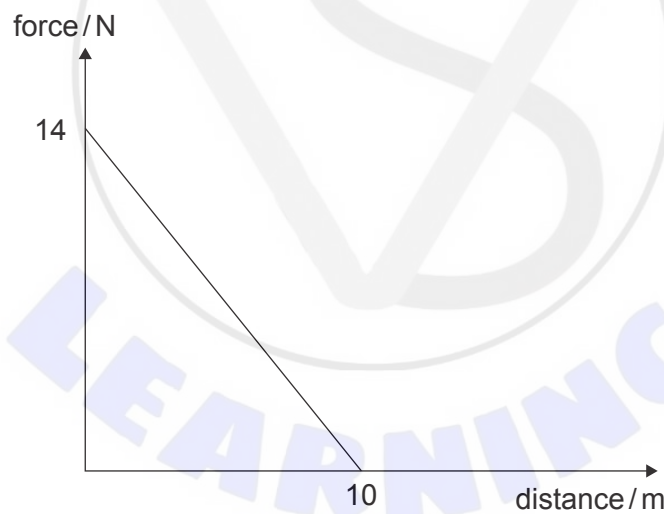
The image contains four free-body diagrams labeled A, B, C, and D. Each diagram shows a ball with different force vectors represented by arrows. Diagram A has a vertical double-headed arrow and a horizontal arrow pointing right. Diagram B has a vertical double-headed arrow pointing down. Diagram C has four arrows pointing up, down, left, and right. Diagram D has a vertical double-headed arrow pointing down.

6. An object is held in position by a light string on an incline plane such that the angle θ to the horizontal is slowly increased from zero.



Which statement is **correct** about the forces acting on the object as the angle θ is increased?

- A. The tension in the string remains constant.
 - B. The normal force decreases.
 - C. The weight component parallel to the slope remains constant.
 - D. The weight decreases.
7. A mass of 4.0 kg moving with a velocity of 1.0 ms^{-1} is acted on by a net force which varies with distance as shown.

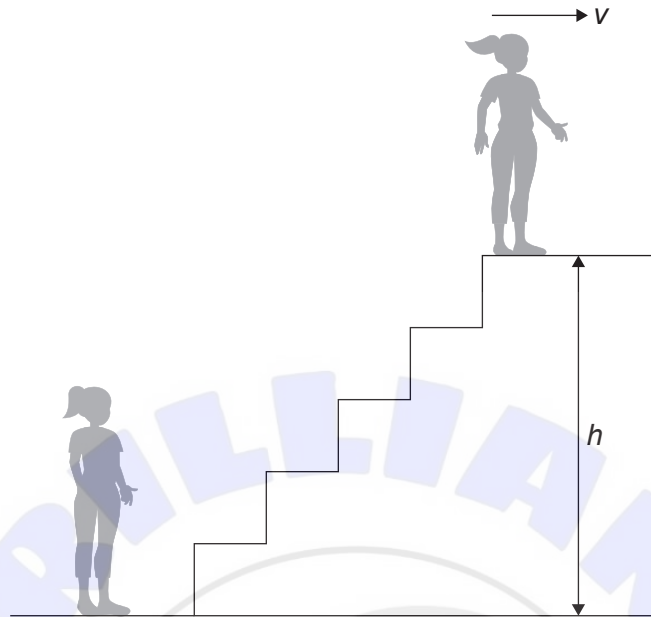


What is the maximum speed of the mass?

- A. $\sqrt{35}\text{ ms}^{-1}$
- B. 6 ms^{-1}
- C. $\sqrt{71}\text{ ms}^{-1}$
- D. 12 ms^{-1}

Turn over

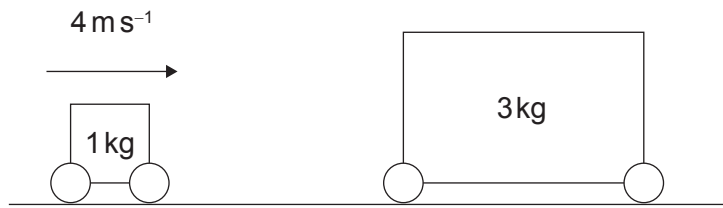
8. A student of mass m initially at rest takes t seconds to run up stairs of height h . At the top of the stairs the student has a velocity v .



What is the average power supplied by the student during the climb?

- A. $\frac{mgh}{t}$
- B. $\frac{m(gh + \frac{1}{2}v^2)}{t}$
- C. $\frac{m(gh - \frac{1}{2}v^2)}{t}$
- D. mgv

9. A cart of mass 1 kg moving at 4 m s^{-1} collides with a stationary cart of mass 3 kg.



After the collision the carts stick together.

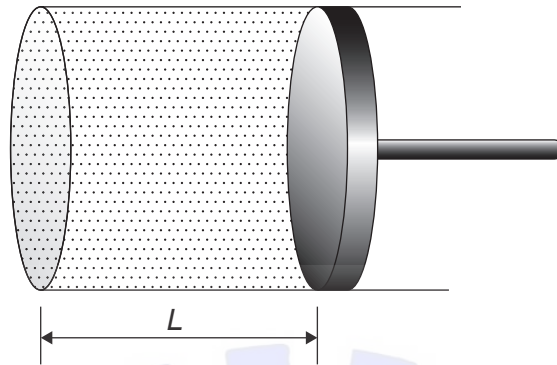
What is $\frac{\text{kinetic energy after the collision}}{\text{kinetic energy before the collision}}$?

- A. $\frac{1}{16}$
- B. $\frac{1}{8}$
- C. $\frac{1}{4}$
- D. $\frac{1}{2}$



Turn over

10. An ideal gas is sealed in a cylinder with a sliding piston. When the piston is a length L from the bottom of the cylinder the total force of the gas particles on the piston is F_{total} and the average force each individual particle imparts on the piston per collision is F_{particle} .

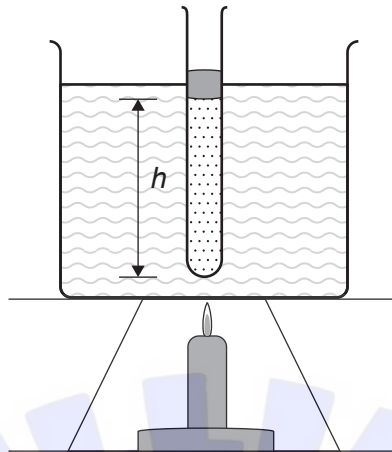


The piston length is slowly reduced to $\frac{L}{2}$ such that the temperature of the gas remains constant.

What is true about the change in F_{total} and the change in F_{particle} ?

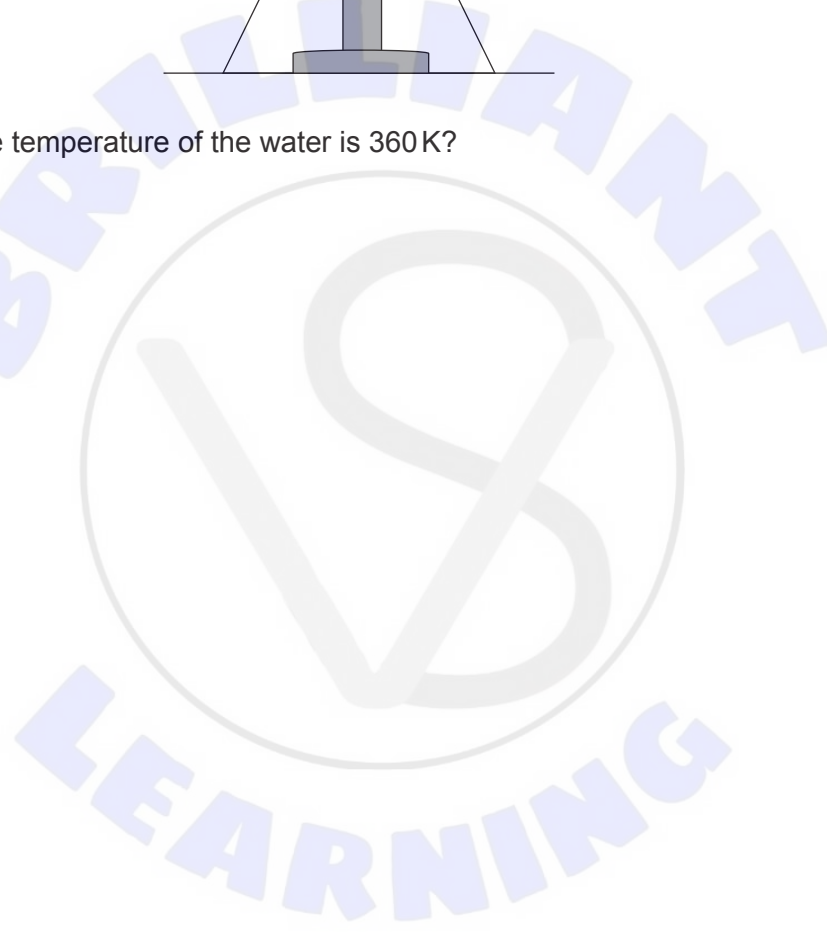
	Change in F_{total}	Change in F_{particle}
A.	Increase	No change
B.	Increase	Increase
C.	No change	No change
D.	No change	Increase

11. A layer of mercury traps a volume of gas in a tube. The tube is placed in a water bath and slowly heated. When the temperature of the water is 300K the height of gas h in the tube is 150 mm.



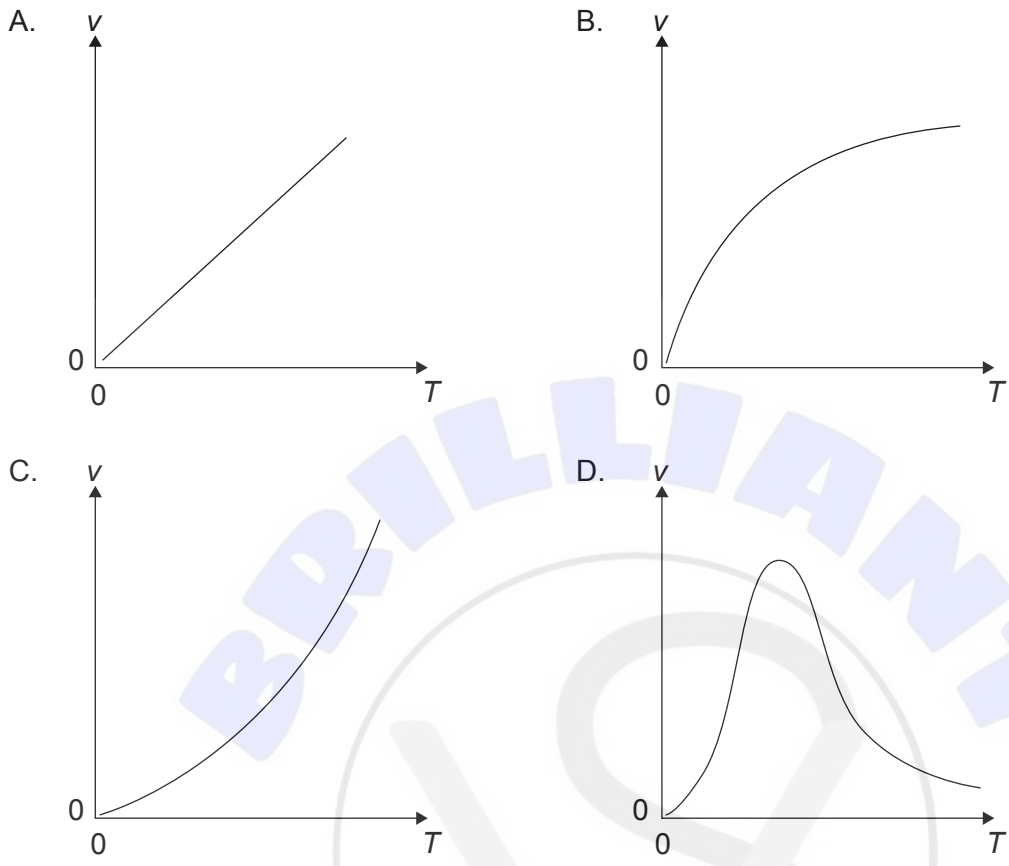
What is h when the temperature of the water is 360K?

- A. 120 mm
- B. 180 mm
- C. 300 mm
- D. 360 mm

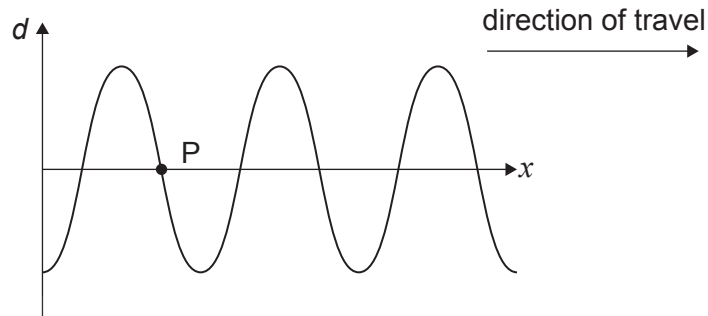


Turn over

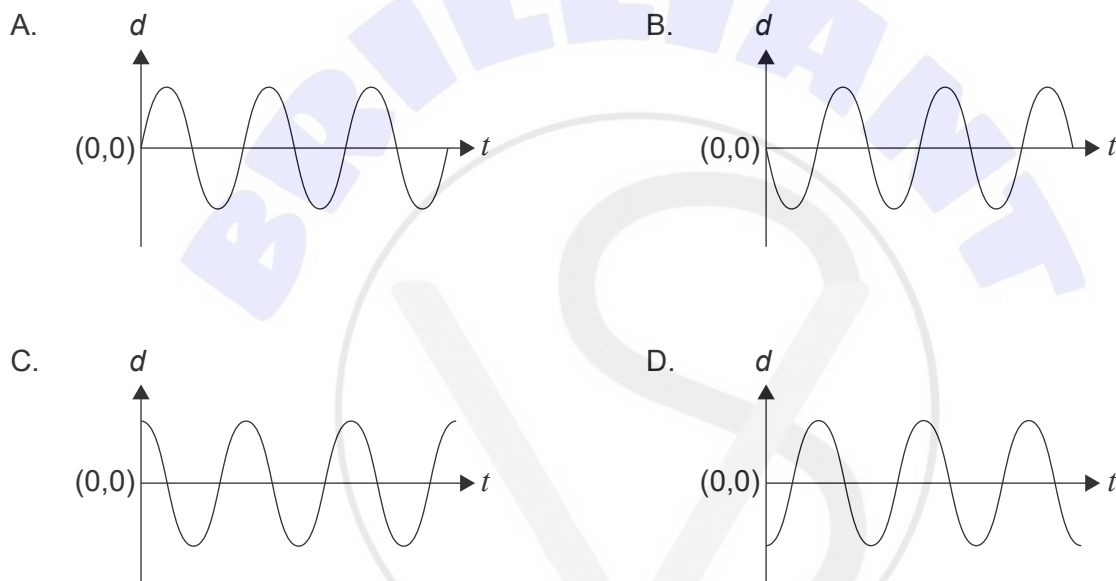
12. Which graph shows the variation of molecular speed v with absolute temperature T of an ideal gas?



13. The graph shows the variation of displacement d with distance x along a transverse wave. At time $t = 0$ a point P has a displacement $d = 0$.



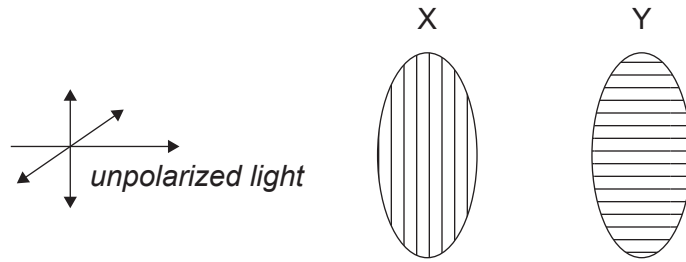
Which of the graphs shows the variation with time t of the displacement d of P?



14. Which statement is **incorrect** about a standing wave?
- A. All points between adjacent nodes oscillate in phase.
 - B. The wave must always reflect out of phase at a boundary.
 - C. The frequency is the same at each point.
 - D. The wavelength is twice the distance between adjacent nodes.

Turn over

15. Unpolarized light is incident on two polarizers X and Y. The transmission axis of X is vertical and that of Y is horizontal.



Polarizer Z can be placed

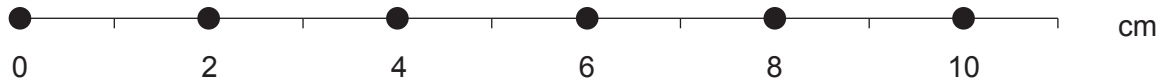
- I. before polarizer X.
- II. between polarizer X and Y.
- III. after polarizer Y.

The transmission axis of Z makes an angle of 45° with those of X and Y.

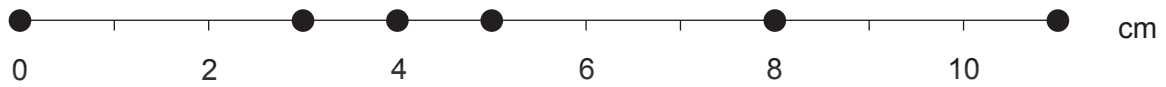
At which positions for Z will no light be transmitted?

- A. I and II only
- B. I and III only
- C. II and III only
- D. I, II and III

16. The equilibrium positions of six particles in a medium are separated by a distance of 2 cm as shown.



The positions of these particles, when a longitudinal wave is transmitted through the medium, are now shown.



What is the wavelength of the wave?

- A. 2 cm
 - B. 4 cm
 - C. 6 cm
 - D. 8 cm
17. Light passes from a medium into air. The critical angle is θ_c .

Which expression gives the speed of light in the medium?

- A. $\frac{1}{c \sin \theta_c}$
- B. $\frac{\sin \theta_c}{c}$
- C. $\frac{c}{\sin \theta_c}$
- D. $c \sin \theta_c$

18. Three statements are made about drift speed v_d in a metal wire.

- I. v_d is less than the speed of light in a vacuum.
- II. v_d is the average speed of positive lattice ions.
- III. v_d is directly proportional to the current.

Which statements are correct?

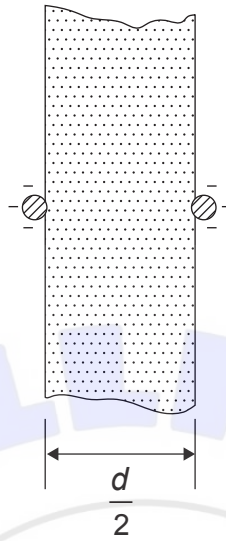
- A. I and II only
- B. I and III only
- C. II and III only
- D. I, II and III

19. Current I flows in a conducting wire.

What expression correctly gives the number of electrons passing through a cross section of the wire in a time t ?

- A. It
- B. $\frac{I}{t}$
- C. Ite
- D. $\frac{It}{e}$

20. Two point charges of equal charge are separated in free space by a distance d and experience an electric force $F_{\text{free space}}$. The same point charges are now separated by a wall of concrete $\frac{d}{2}$ thick and experience an electric force F_{concrete} .



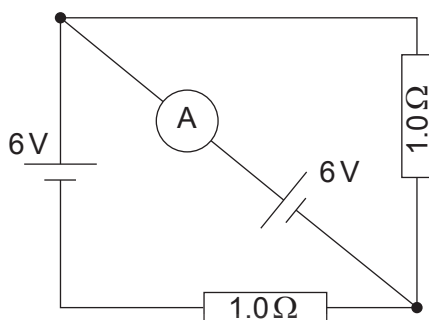
The permittivity of concrete is four times that of free space.

What is $\frac{F_{\text{concrete}}}{F_{\text{free space}}}$?

- A. $\frac{1}{4}$
- B. $\frac{1}{2}$
- C. 1
- D. 8

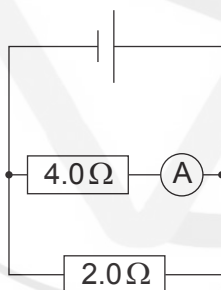
Turn over

21. Two 1.0Ω resistors are placed in a circuit with two 6V cells of negligible internal resistance as shown.



What is the reading on the ideal ammeter?


- A. 2.0A
 - B. 3.0A
 - C. 6.0A
 - D. 12.0A
22. A 2.0Ω and a 4.0Ω resistor are connected in parallel to a cell with negligible internal resistance. An ammeter placed in the circuit as shown measures a current of 1.0A .



What is the current passing through the 2.0Ω resistor?


- A. 0.5A
- B. 1.0A
- C. 2.0A
- D. 4.0A

23. An old-fashioned bicycle is moving with a constant speed v . The front wheel has a radius 3 times that of the rear wheel. Points X and Y are positioned on the front and rear wheel as shown.



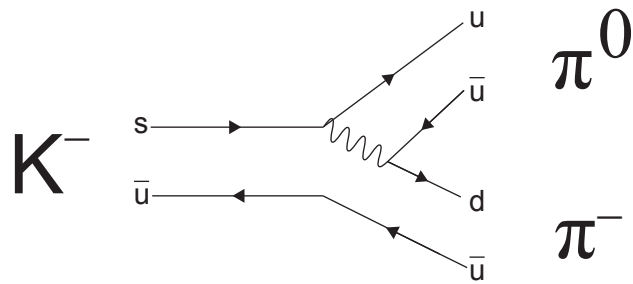
What is $\frac{\text{acceleration of X}}{\text{acceleration of Y}}$?

- A. $\frac{1}{9}$
- B. $\frac{1}{3}$
- C. 3
- D. 9



Turn over

24. The Feynman diagram shows a possible decay of a K^- meson.

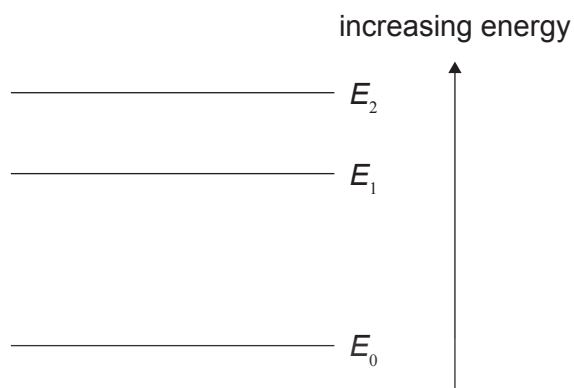


Which particle is represented by the wavy line?

- A. Gluon
- B. Z^0
- C. Photon
- D. W^-



25. Three electron energy levels of a gas atom E_0 , E_1 and E_2 are shown.

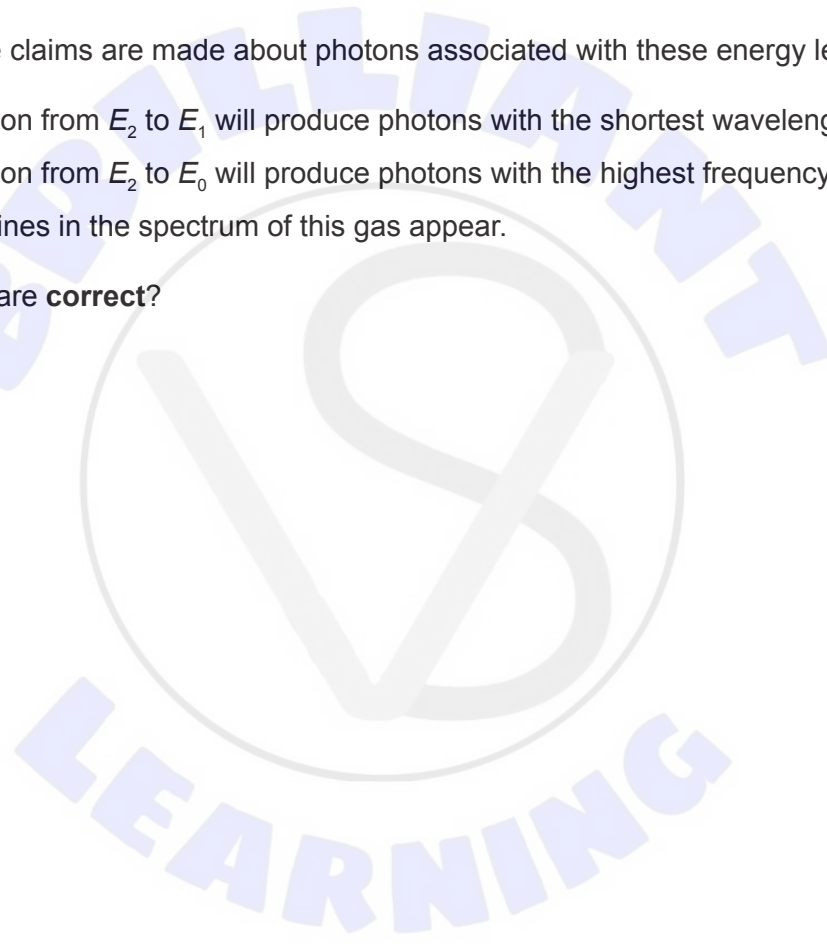


The following three claims are made about photons associated with these energy levels:

- I. Transition from E_2 to E_1 will produce photons with the shortest wavelength.
- II. Transition from E_2 to E_0 will produce photons with the highest frequency.
- III. Three lines in the spectrum of this gas appear.

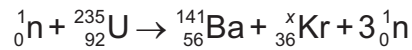
Which statements are **correct**?

- A. I and II only
- B. I and III only
- C. II and III only
- D. I, II and III



Turn over

26. A nucleus of uranium undergoes fission.



What is correct about the number of nucleons x in the Kr nucleus and the ratio

$\frac{\text{binding energy per nucleon of Kr}}{\text{binding energy per nucleon of Ba}}$?

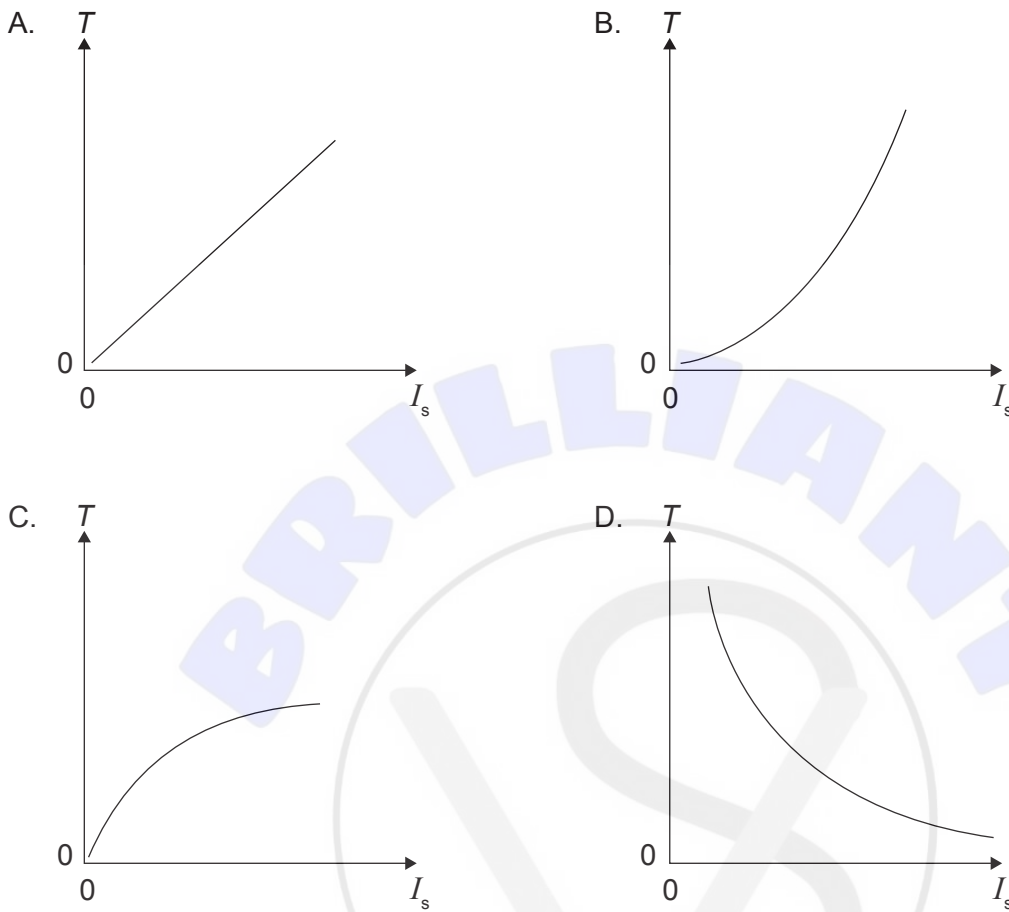
	Number of nucleons x in Kr nucleus	$\frac{\text{binding energy per nucleon of Kr}}{\text{binding energy per nucleon of Ba}}$
A.	92	Greater than 1
B.	92	Less than 1
C.	94	Greater than 1
D.	94	Less than 1

27. The half-life of a radioactive substance is 5 hours. At time $t = 20$ hours N nuclei are present in the sample.

What was the number of radioactive nuclei that were present at time $t = 5$ hours?

- A. $3N$
- B. $4N$
- C. $8N$
- D. $9N$

28. A planet has a known albedo and emissivity. The average intensity received at the surface is I_s . Which graph describes the variation of surface temperature T with I_s ?



29. The wind generator equation can be used to estimate the power produced by a wind turbine from a given set of conditions.

Which assumption is **not** used in the derivation of this equation?

- A. The number of blades on the turbine is a constant.
- B. Speed of air particles after passing through the turbine is zero.
- C. Speed of air particles approaching the turbine cross-sectional area is constant.
- D. Turbulence created by the spinning turbine is negligible

Turn over

30. An engine provides a thrust force F to move a vehicle at constant velocity v . The engine has an efficiency e and consumes fuel with an energy density η .

Which expression gives the rate at which the volume of fuel is being consumed by the engine?

- A. $\frac{Fv}{e\eta}$
- B. $\frac{Fv\eta}{e}$
- C. $\frac{eFv}{\eta}$
- D. $\frac{e\eta}{Fv}$
-





Disclaimer:

Content used in IB assessments is taken from authentic, third-party sources. The views expressed within them belong to their individual authors and/or publishers and do not necessarily reflect the views of the IB.

References:

23. Clu, n.d. *Penny farthing bicycle*. [image online] Available at: <https://www.gettyimages.co.uk/detail/illustration/penny-farthing-bicycle-first-exercise-royalty-free-illustration/1179950344> [Accessed 16 May 2023]. Source adapted.

All other texts, graphics and illustrations © International Baccalaureate Organization 2024