

© International Baccalaureate Organization 2022

All rights reserved. No part of this product may be reproduced in any form or by any electronic or mechanical means, including information storage and retrieval systems, without the prior written permission from the IB. Additionally, the license tied with this product prohibits use of any selected files or extracts from this product. Use by third parties, including but not limited to publishers, private teachers, tutoring or study services, preparatory schools, vendors operating curriculum mapping services or teacher resource digital platforms and app developers, whether fee-covered or not, is prohibited and is a criminal offense.

More information on how to request written permission in the form of a license can be obtained from <https://ibo.org/become-an-ib-school/ib-publishing/licensing/applying-for-a-license/>.

© Organisation du Baccalauréat International 2022

Tous droits réservés. Aucune partie de ce produit ne peut être reproduite sous quelque forme ni par quelque moyen que ce soit, électronique ou mécanique, y compris des systèmes de stockage et de récupération d'informations, sans l'autorisation écrite préalable de l'IB. De plus, la licence associée à ce produit interdit toute utilisation de tout fichier ou extrait sélectionné dans ce produit. L'utilisation par des tiers, y compris, sans toutefois s'y limiter, des éditeurs, des professeurs particuliers, des services de tutorat ou d'aide aux études, des établissements de préparation à l'enseignement supérieur, des fournisseurs de services de planification des programmes d'études, des gestionnaires de plateformes pédagogiques en ligne, et des développeurs d'applications, moyennant paiement ou non, est interdite et constitue une infraction pénale.

Pour plus d'informations sur la procédure à suivre pour obtenir une autorisation écrite sous la forme d'une licence, rendez-vous à l'adresse <https://ibo.org/become-an-ib-school/ib-publishing/licensing/applying-for-a-license/>.

© Organización del Bachillerato Internacional, 2022

Todos los derechos reservados. No se podrá reproducir ninguna parte de este producto de ninguna forma ni por ningún medio electrónico o mecánico, incluidos los sistemas de almacenamiento y recuperación de información, sin la previa autorización por escrito del IB. Además, la licencia vinculada a este producto prohíbe el uso de todo archivo o fragmento seleccionado de este producto. El uso por parte de terceros —lo que incluye, a título enunciativo, editoriales, profesores particulares, servicios de apoyo académico o ayuda para el estudio, colegios preparatorios, desarrolladores de aplicaciones y entidades que presten servicios de planificación curricular u ofrezcan recursos para docentes mediante plataformas digitales—, ya sea incluido en tasas o no, está prohibido y constituye un delito.

En este enlace encontrará más información sobre cómo solicitar una autorización por escrito en forma de licencia: <https://ibo.org/become-an-ib-school/ib-publishing/licensing/applying-for-a-license/>.



Mathematics: applications and interpretation
Standard level
Paper 1

Monday 31 October 2022 (afternoon)

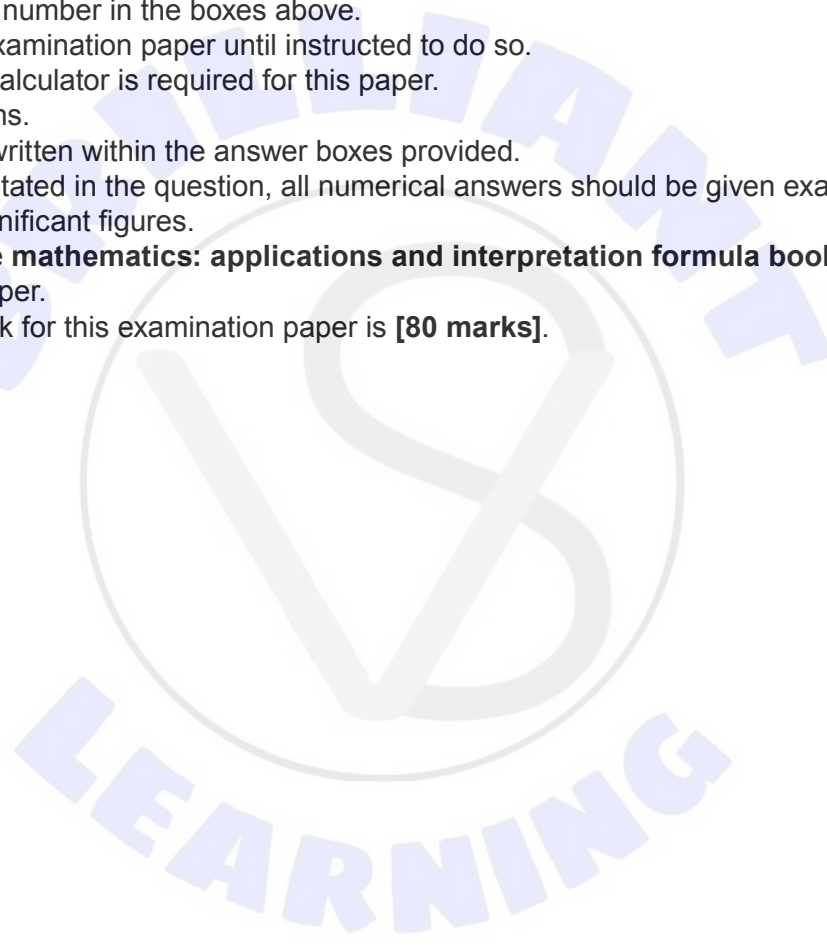
Candidate session number

--	--	--	--	--	--	--	--	--	--

1 hour 30 minutes

Instructions to candidates

- Write your session number in the boxes above.
- Do not open this examination paper until instructed to do so.
- A graphic display calculator is required for this paper.
- Answer all questions.
- Answers must be written within the answer boxes provided.
- Unless otherwise stated in the question, all numerical answers should be given exactly or correct to three significant figures.
- A clean copy of the **mathematics: applications and interpretation formula booklet** is required for this paper.
- The maximum mark for this examination paper is **[80 marks]**.



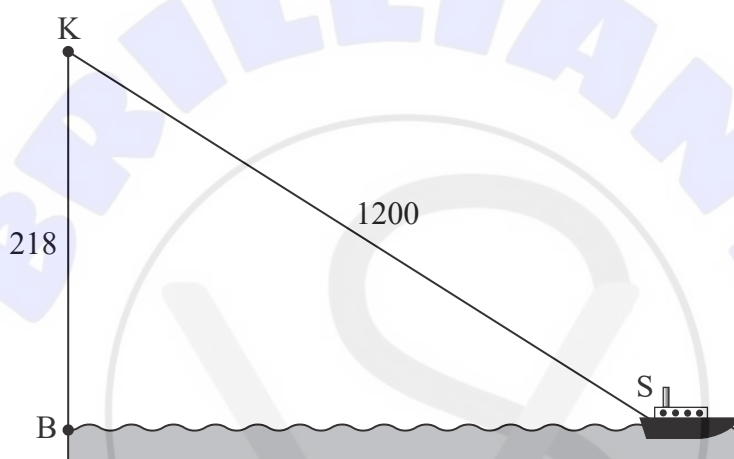
Answers must be written within the answer boxes provided. Full marks are not necessarily awarded for a correct answer with no working. Answers must be supported by working and/or explanations. Solutions found from a graphic display calculator should be supported by suitable working. For example, if graphs are used to find a solution, you should sketch these as part of your answer. Where an answer is incorrect, some marks may be given for a correct method, provided this is shown by written working. You are therefore advised to show all working.

1. [Maximum mark: 6]

Kacheena stands at point K, the top of a 218 m vertical cliff. The base of the cliff is located at point B. A ship is located at point S, 1200 m from Kacheena.

This information is shown in the following diagram.

diagram not to scale




- (a) Find the angle of elevation from the ship to Kacheena. [2]
- (b) Find the horizontal distance from the base of the cliff to the ship. [2]
- (c) Write down your answer to part (b) in the form $a \times 10^k$ where $1 \leq a < 10$ and $k \in \mathbb{Z}$. [2]

(This question continues on the following page)



3. [Maximum mark: 5]

DeVaughn throws a javelin in a school track and field competition.



The height, h , of the front tip of the javelin above the ground, in metres, is modelled by the following quadratic function,

$$h(t) = -3.6t^2 + 10.8t + 1.8, \quad t \geq 0$$

where t is the time in seconds after the javelin is thrown.

- (a) Write down the height of the front tip of the javelin at the time it is thrown. [1]
- (b) Find the value of t when the front tip of the javelin reaches its maximum height. [2]
- (c) Find the value of t when the front tip of the javelin strikes the ground. [2]

.....

.....

.....

.....

.....

.....

.....

.....

.....

.....

.....

.....

.....

.....

.....

.....

.....

.....

.....

.....

.....

.....

.....





Please **do not** write on this page.

Answers written on this page
will not be marked.



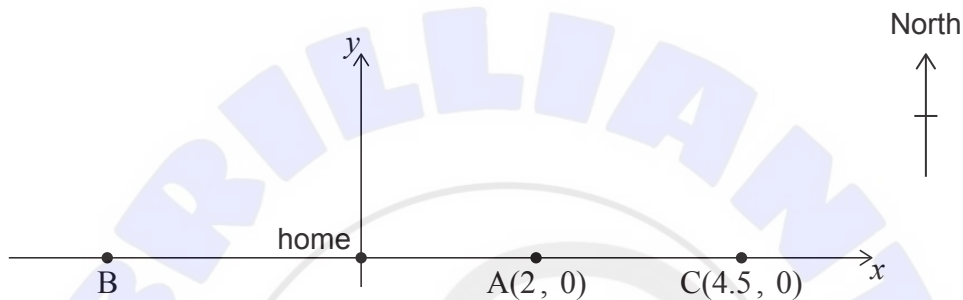
11. [Maximum mark: 7]

Kristi's house is located on a long straight road which traverses east-west. The road can be modelled by the equation $y = 0$, and her home is located at the origin $(0, 0)$.

She is training for a marathon by running from her home to a point on the road and then returning to her home by bus.

- The first day Kristi runs 2 kilometres east to point $A(2, 0)$.
- The second day Kristi runs west to point B.
- The third day Kristi runs 4.5 kilometres east to point $C(4.5, 0)$.

This information is represented in the following diagram.



Each day Kristi increases the distance she runs. The point she reaches each day can be represented by an x -coordinate. These x -coordinates form a geometric sequence.

- (a) Show that the common ratio, r , is -1.5 . [2]

On the 6th day, Kristi runs to point F.

- (b) Find the location of point F. [2]


- (c) Find the total distance Kristi runs during the first 7 days of training. [3]

(This question continues on the following page)



12. [Maximum mark: 6]

A cat runs inside a circular exercise wheel, making the wheel spin at a constant rate in an anticlockwise direction. The height, h cm, of a fixed point, P, on the wheel can be modelled by $h(t) = a \sin(bt) + c$ where t is the time in seconds and $a, b, c \in \mathbb{R}^+$.



When $t = 0$, point P is at a height of 78 cm.

(a) Write down the value of c . [1]

When $t = 4$, point P first reaches its maximum height of 143 cm.

(b) Find the value of [3]

(i) a .

(ii) b .

(c) Write down the minimum height of point P. [1]

Later, the cat is tired, and it takes twice as long for point P to complete one revolution at a new constant rate.

(d) Write down the new value of b . [1]

Area with horizontal dotted lines for writing answers.





Please **do not** write on this page.

Answers written on this page
will not be marked.





Please **do not** write on this page.

Answers written on this page
will not be marked.





Please **do not** write on this page.

Answers written on this page
will not be marked.

