

© International Baccalaureate Organization 2021

All rights reserved. No part of this product may be reproduced in any form or by any electronic or mechanical means, including information storage and retrieval systems, without the prior written permission from the IB. Additionally, the license tied with this product prohibits use of any selected files or extracts from this product. Use by third parties, including but not limited to publishers, private teachers, tutoring or study services, preparatory schools, vendors operating curriculum mapping services or teacher resource digital platforms and app developers, whether fee-covered or not, is prohibited and is a criminal offense.

More information on how to request written permission in the form of a license can be obtained from <https://ibo.org/become-an-ib-school/ib-publishing/licensing/applying-for-a-license/>.

© Organisation du Baccalauréat International 2021

Tous droits réservés. Aucune partie de ce produit ne peut être reproduite sous quelque forme ni par quelque moyen que ce soit, électronique ou mécanique, y compris des systèmes de stockage et de récupération d'informations, sans l'autorisation écrite préalable de l'IB. De plus, la licence associée à ce produit interdit toute utilisation de tout fichier ou extrait sélectionné dans ce produit. L'utilisation par des tiers, y compris, sans toutefois s'y limiter, des éditeurs, des professeurs particuliers, des services de tutorat ou d'aide aux études, des établissements de préparation à l'enseignement supérieur, des fournisseurs de services de planification des programmes d'études, des gestionnaires de plateformes pédagogiques en ligne, et des développeurs d'applications, moyennant paiement ou non, est interdite et constitue une infraction pénale.

Pour plus d'informations sur la procédure à suivre pour obtenir une autorisation écrite sous la forme d'une licence, rendez-vous à l'adresse <https://ibo.org/become-an-ib-school/ib-publishing/licensing/applying-for-a-license/>.

© Organización del Bachillerato Internacional, 2021

Todos los derechos reservados. No se podrá reproducir ninguna parte de este producto de ninguna forma ni por ningún medio electrónico o mecánico, incluidos los sistemas de almacenamiento y recuperación de información, sin la previa autorización por escrito del IB. Además, la licencia vinculada a este producto prohíbe el uso de todo archivo o fragmento seleccionado de este producto. El uso por parte de terceros —lo que incluye, a título enunciativo, editoriales, profesores particulares, servicios de apoyo académico o ayuda para el estudio, colegios preparatorios, desarrolladores de aplicaciones y entidades que presten servicios de planificación curricular u ofrezcan recursos para docentes mediante plataformas digitales—, ya sea incluido en tasas o no, está prohibido y constituye un delito.

En este enlace encontrará más información sobre cómo solicitar una autorización por escrito en forma de licencia: <https://ibo.org/become-an-ib-school/ib-publishing/licensing/applying-for-a-license/>.

Mathematics: analysis and approaches
Standard level
Paper 2

Friday 7 May 2021 (morning)

Candidate session number

--	--	--	--	--	--	--	--	--	--

1 hour 30 minutes

Instructions to candidates

- Write your session number in the boxes above.
- Do not open this examination paper until instructed to do so.
- A graphic display calculator is required for this paper.
- Section A: answer all questions. Answers must be written within the answer boxes provided.
- Section B: answer all questions in the answer booklet provided. Fill in your session number on the front of the answer booklet, and attach it to this examination paper and your cover sheet using the tag provided.
- Unless otherwise stated in the question, all numerical answers should be given exactly or correct to three significant figures.
- A clean copy of the **mathematics: analysis and approaches formula booklet** is required for this paper.
- The maximum mark for this examination paper is **[80 marks]**.



Full marks are not necessarily awarded for a correct answer with no working. Answers must be supported by working and/or explanations. Solutions found from a graphic display calculator should be supported by suitable working. For example, if graphs are used to find a solution, you should sketch these as part of your answer. Where an answer is incorrect, some marks may be given for a correct method, provided this is shown by written working. You are therefore advised to show all working.

Section A

Answer **all** questions. Answers must be written within the answer boxes provided. Working may be continued below the lines, if necessary.

1. [Maximum mark: 6]

At a café, the waiting time between ordering and receiving a cup of coffee is dependent upon the number of customers who have already ordered their coffee and are waiting to receive it.

Sarah, a regular customer, visited the café on five consecutive days. The following table shows the number of customers, x , ahead of Sarah who have already ordered and are waiting to receive their coffee and Sarah's waiting time, y minutes.

Number of customers (x)	3	9	11	10	5
Sarah's waiting time (y)	6	10	12	11	6

The relationship between x and y can be modelled by the regression line of y on x with equation $y = ax + b$.

- (a) (i) Find the value of a and the value of b .
- (ii) Write down the value of Pearson's product-moment correlation coefficient, r . [3]
- (b) Interpret, in context, the value of a found in part (a)(i). [1]

On another day, Sarah visits the café to order a coffee. Seven customers have already ordered their coffee and are waiting to receive it.

- (c) Use the result from part (a)(i) to estimate Sarah's waiting time to receive her coffee. [2]

.....

.....

.....

.....

.....

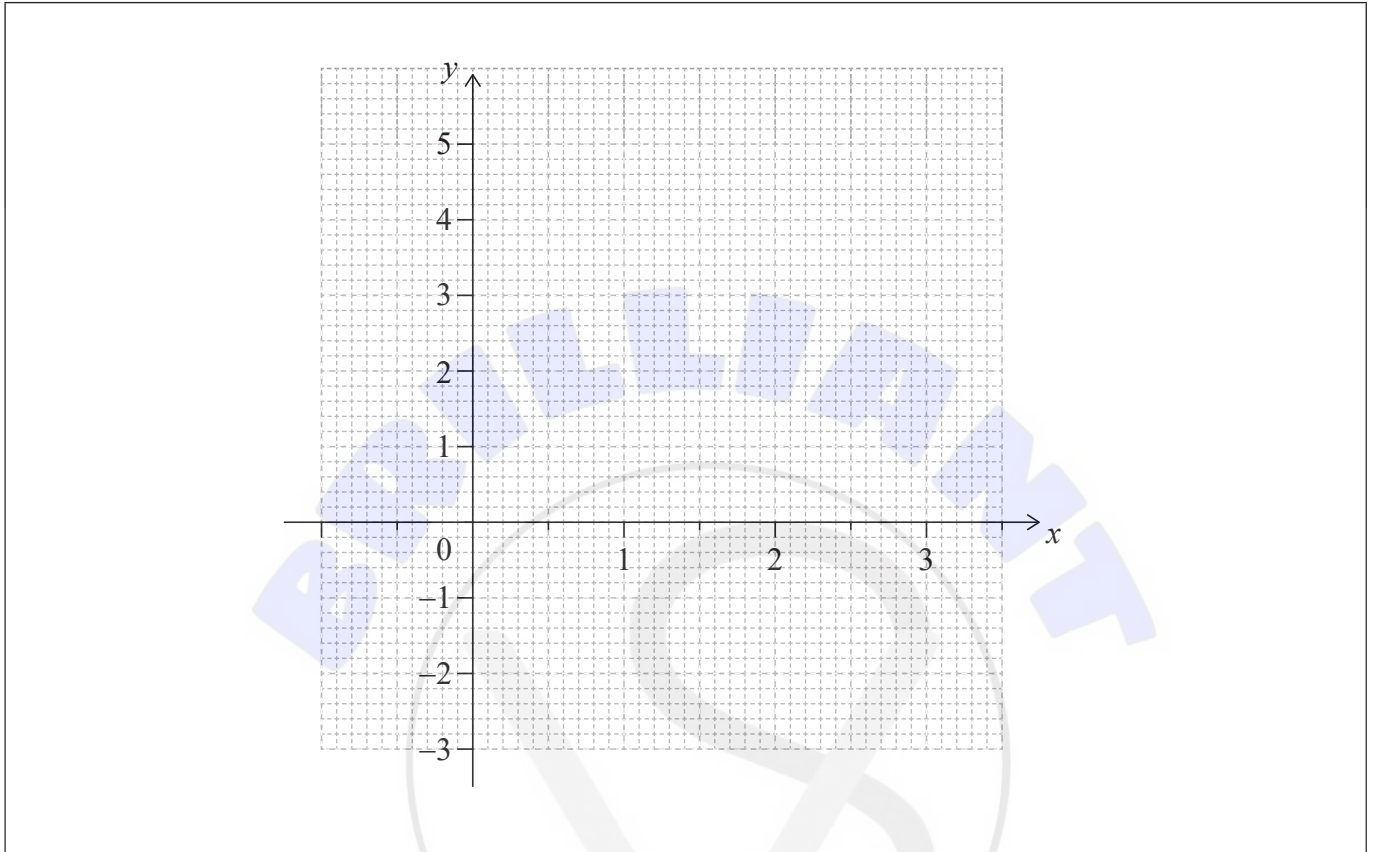
.....



2. [Maximum mark: 5]

Let $f(x) = 3x - 4^{0.15x^2}$ for $0 \leq x \leq 3$.

(a) Sketch the graph of f on the grid below. [3]



(b) Find the value of x for which $f'(x) = 0$. [2]

.....

.....

.....

.....

.....

.....

.....

.....

.....

.....

.....

.....

.....

.....

.....

.....

.....

.....

.....

.....

.....

.....

.....



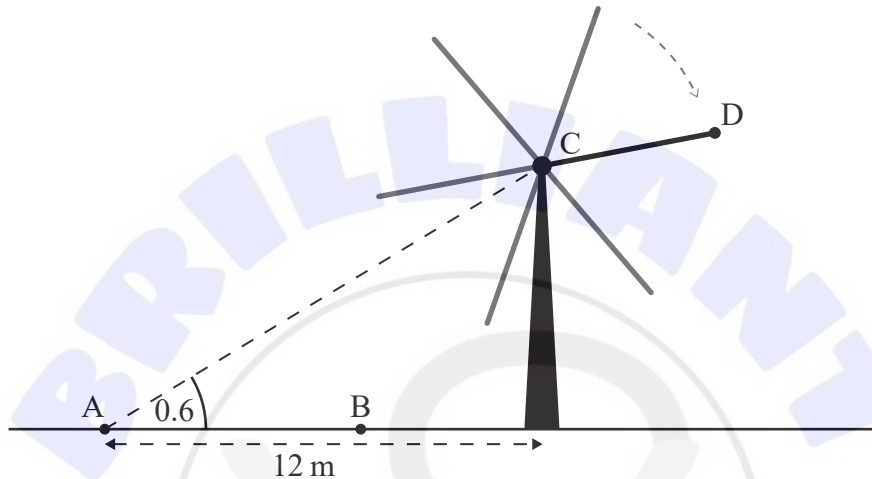
Do **not** write solutions on this page.

Section B

Answer **all** questions in the answer booklet provided. Please start each question on a new page.

7. [Maximum mark: 13]

The six blades of a windmill rotate around a centre point C. Points A and B and the base of the windmill are on level ground, as shown in the following diagram.



From point A the angle of elevation of point C is 0.6 radians.

- (a) Given that point A is 12 metres from the base of the windmill, find the height of point C above the ground. [2]

An observer walks 7 metres from point A to point B.

- (b) Find the angle of elevation of point C from point B. [2]

The observer keeps walking until he is standing directly under point C. The observer has a height of 1.8 metres, and as the blades of the windmill rotate, the end of each blade passes 2.5 metres over his head.

- (c) Find the length of each blade of the windmill. [2]

One of the blades is painted a different colour than the others. The end of this blade is labelled point D. The height h , in metres, of point D above the ground can be modelled by the function $h(t) = p \cos\left(\frac{3\pi}{10}t\right) + q$, where t is in seconds and $p, q \in \mathbb{R}$. When $t = 0$, point D is at its maximum height.

- (d) Find the value of p and the value of q . [4]

If the observer stands directly under point C for one minute, point D will pass over his head n times.

- (e) Find the value of n . [3]



Do **not** write solutions on this page.

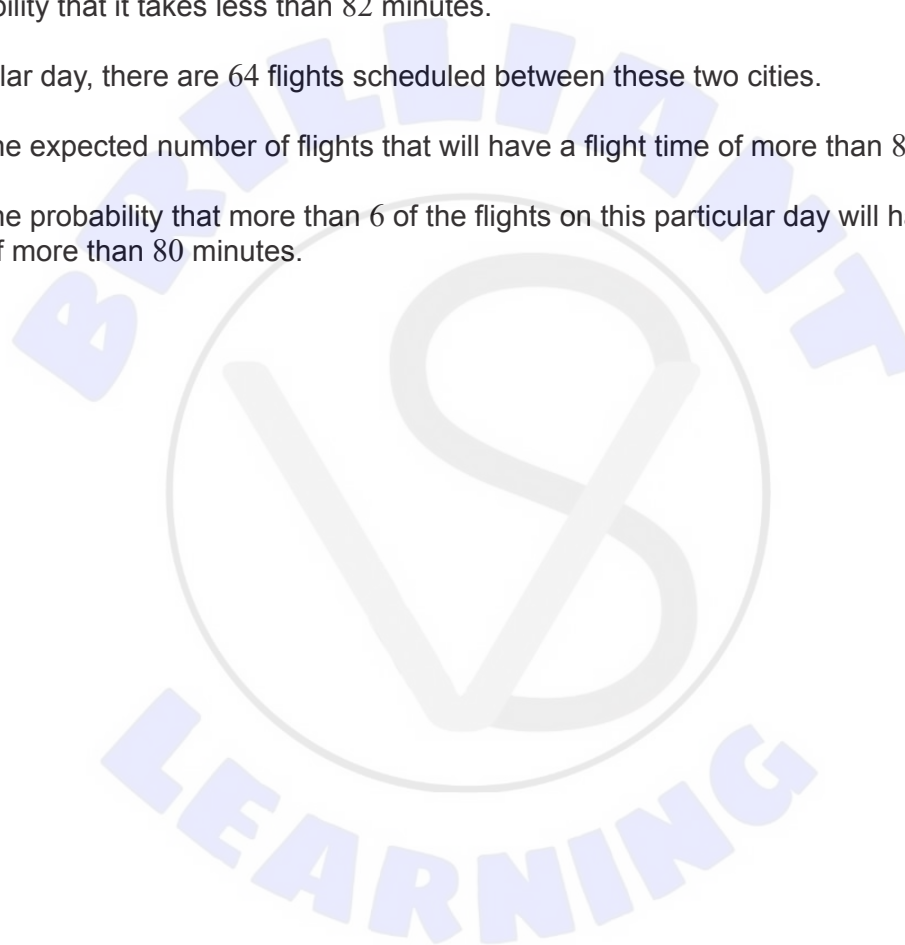
8. [Maximum mark: 15]

The flight times, T minutes, between two cities can be modelled by a normal distribution with a mean of 75 minutes and a standard deviation of σ minutes.

- (a) Given that 2% of the flight times are longer than 82 minutes, find the value of σ . [3]
- (b) Find the probability that a randomly selected flight will have a flight time of more than 80 minutes. [2]
- (c) Given that a flight between the two cities takes longer than 80 minutes, find the probability that it takes less than 82 minutes. [4]

On a particular day, there are 64 flights scheduled between these two cities.

- (d) Find the expected number of flights that will have a flight time of more than 80 minutes. [3]
- (e) Find the probability that more than 6 of the flights on this particular day will have a flight time of more than 80 minutes. [3]



Do **not** write solutions on this page.

9. [Maximum mark: 15]

All answers in this question should be given to four significant figures.

In a local weekly lottery, tickets cost \$2 each.

In the first week of the lottery, a player will receive \$ D for each ticket, with the probability distribution shown in the following table. For example, the probability of a player receiving \$10 is 0.03. The grand prize in the first week of the lottery is \$1000.

d	0	2	10	50	Grand Prize
$P(D = d)$	0.85	c	0.03	0.002	0.0001

(a) Find the value of c . [2]

(b) Determine whether this lottery is a fair game in the first week. Justify your answer. [4]

If nobody wins the grand prize in the first week, the probabilities will remain the same, but the value of the grand prize will be \$2000 in the second week, and the value of the grand prize will continue to double each week until it is won. All other prize amounts will remain the same.

(c) Given that the grand prize is not won and the grand prize continues to double, write an expression in terms of n for the value of the grand prize in the n th week of the lottery. [2]

The w th week is the first week in which the player is expected to make a profit. Ryan knows that if he buys a lottery ticket in the w th week, his expected profit is \$ p .

(d) Find the value of p . [7]

References:

© International Baccalaureate Organization 2021





Please **do not** write on this page.

Answers written on this page
will not be marked.





Please **do not** write on this page.

Answers written on this page
will not be marked.

