

No part of this product may be reproduced in any form or by any electronic or mechanical means, including information storage and retrieval systems, without written permission from the IB.

Additionally, the license tied with this product prohibits commercial use of any selected files or extracts from this product. Use by third parties, including but not limited to publishers, private teachers, tutoring or study services, preparatory schools, vendors operating curriculum mapping services or teacher resource digital platforms and app developers, is not permitted and is subject to the IB's prior written consent via a license. More information on how to request a license can be obtained from <https://ibo.org/become-an-ib-school/ib-publishing/licensing/applying-for-a-license/>.

Aucune partie de ce produit ne peut être reproduite sous quelque forme ni par quelque moyen que ce soit, électronique ou mécanique, y compris des systèmes de stockage et de récupération d'informations, sans l'autorisation écrite de l'IB.

De plus, la licence associée à ce produit interdit toute utilisation commerciale de tout fichier ou extrait sélectionné dans ce produit. L'utilisation par des tiers, y compris, sans toutefois s'y limiter, des éditeurs, des professeurs particuliers, des services de tutorat ou d'aide aux études, des établissements de préparation à l'enseignement supérieur, des fournisseurs de services de planification des programmes d'études, des gestionnaires de plateformes pédagogiques en ligne, et des développeurs d'applications, n'est pas autorisée et est soumise au consentement écrit préalable de l'IB par l'intermédiaire d'une licence. Pour plus d'informations sur la procédure à suivre pour demander une licence, rendez-vous à l'adresse suivante : <https://ibo.org/become-an-ib-school/ib-publishing/licensing/applying-for-a-license/>.

No se podrá reproducir ninguna parte de este producto de ninguna forma ni por ningún medio electrónico o mecánico, incluidos los sistemas de almacenamiento y recuperación de información, sin que medie la autorización escrita del IB.

Además, la licencia vinculada a este producto prohíbe el uso con fines comerciales de todo archivo o fragmento seleccionado de este producto. El uso por parte de terceros —lo que incluye, a título enunciativo, editoriales, profesores particulares, servicios de apoyo académico o ayuda para el estudio, colegios preparatorios, desarrolladores de aplicaciones y entidades que presten servicios de planificación curricular u ofrezcan recursos para docentes mediante plataformas digitales— no está permitido y estará sujeto al otorgamiento previo de una licencia escrita por parte del IB. En este enlace encontrará más información sobre cómo solicitar una licencia: <https://ibo.org/become-an-ib-school/ib-publishing/licensing/applying-for-a-license/>.

Chemistry

Standard level

Paper 3

Friday 6 November 2020 (morning)

Candidate session number

--	--	--	--	--	--	--	--	--	--

1 hour

Instructions to candidates

- Write your session number in the boxes above.
- Do not open this examination paper until instructed to do so.
- Answers must be written within the answer boxes provided.
- A calculator is required for this paper.
- A clean copy of the **chemistry data booklet** is required for this paper.
- The maximum mark for this examination paper is **[35 marks]**.

Section A	Questions
Answer all questions.	1 – 2

Section B	Questions
Answer all of the questions from one of the options.	
Option A — Materials	3 – 4
Option B — Biochemistry	5 – 8
Option C — Energy	9 – 10
Option D — Medicinal chemistry	11 – 14



Section A

Answer **all** questions. Answers must be written within the answer boxes provided.

1. In order to determine the oil content of different types of potato crisps (chips), a student weighed 5.00g of crushed crisps and mixed them with 20.0 cm³ of non-polar solvent.

She assumed all the oil in the crisps dissolved in the solvent.

The student then filtered the mixture to remove any solids, and gently heated the solution on a hot plate to evaporate the solvent.

She measured the mass of the oil that remained from each type of crisps.

- (a) Suggest why a non-polar solvent was needed. [1]

.....

.....

- (b) State one reason why the mixture was not heated strongly. [1]

.....

.....

- (c) Non-polar solvents can be toxic. Suggest a modification to the experiment which allows the evaporated solvent to be collected. [1]

.....

.....

(This question continues on the following page)



(Question 1 continued)


- (d) Suggest one source of error in the experiment, excluding faulty apparatus and human error, that would lead to the following: [2]

Experimental mass greater than actual mass of oil in crisps:

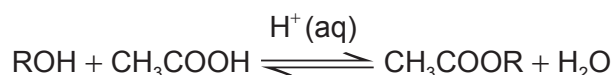
.....
.....
.....

Experimental mass lower than actual mass of oil in crisps:

.....
.....
.....



2. An investigation was carried out to determine the effect of chain length of the alcohol on the equilibrium constant, K_c , for the reversible reaction:



The reactants, products and the catalyst form a homogeneous mixture.

Fixed volumes of each alcohol, the ethanoic acid and the sulfuric acid catalyst were placed in sealed conical flasks.

At equilibrium, the flasks were placed in an ice bath, and samples of each flask titrated with NaOH(aq) to determine the ethanoic acid concentration present in the equilibrium mixture.

The following processed results were obtained.

ROH	Chain length / number of carbons	Experimentally determined K_c	Literature value of K_c
Methanol	1	6.5 ± 0.4	5.3
Ethanol	2	5.1 ± 0.3	4.0
Propan-1-ol	3	5.0 ± 0.3	4.1
Butan-1-ol	4	5.6 ± 0.5	4.2
Pentan-1-ol	5	3.2 ± 0.3	Not available

- (a) Identify the independent and dependent variables in this experiment.

[1]

Independent variable:

.....

Dependent variable:

.....

(This question continues on the following page)



(Question 2 continued)

- (b) The ice bath is used at equilibrium to slow down the forward and reverse reactions. Explain why adding a large amount of water to the reaction mixture would also slow down **both** reactions. [2]

.....

.....

.....

.....

- (c) Suggest why the titration must be conducted quickly even though a low temperature is maintained. [1]

.....

.....

.....

- (d) An additional experiment was conducted in which only the sulfuric acid catalyst was titrated with NaOH(aq). Outline why this experiment was necessary. [1]

.....

.....

.....

(This question continues on the following page)



(Question 2 continued)

- (e) Calculate the percentage uncertainty and percentage error in the experimentally determined value of K_c for methanol.

[2]

Percentage uncertainty:

.....
.....
.....

Percentage error:

.....
.....
.....

- (f) Comment on the magnitudes of random and systematic errors in this experiment using the answers in (e).

[2]

.....
.....
.....
.....
.....

- (g) Suggest a risk of using sulfuric acid as the catalyst.

[1]

.....
.....
.....



Section B

Answer **all** of the questions from **one** of the options. Answers must be written within the answer boxes provided.

Option A — Materials

3. Carbon fibre reinforced plastic (CFRP) is a useful composite. Epoxy is a thermoset polymer that is used as a binding polymer when making CFRP.

(a) Outline the **two** distinct phases of this composite. [2]

.....

.....

.....

.....

(b) (i) Thermoplastic composites are increasingly replacing thermosets.
Suggest **one** advantage of thermoplastic polymers over thermosets. [1]

.....

.....

(ii) Explain how thermoplastics, such as polyvinylchloride, PVC, can be made more flexible by the addition of phthalate ester plasticizers. [3]

.....

.....

.....

.....

.....

.....

(This question continues on page 9)





Please **do not** write on this page.

Answers written on this page
will not be marked.



(Option A, question 3 continued)

(c) Explain why phthalates are replaced by other plasticizers in the production of plastics. [2]

.....
.....
.....
.....

4. There has been significant growth in the use of carbon nanotubes, CNT.

(a) Explain these properties of carbon nanotubes. [2]

Excellent strength:
.....
.....

Excellent conductivity:
.....
.....

(b) (i) Alloying metals changes their properties. Suggest **one** property of magnesium that could be improved by making a magnesium-CNT alloy. [1]

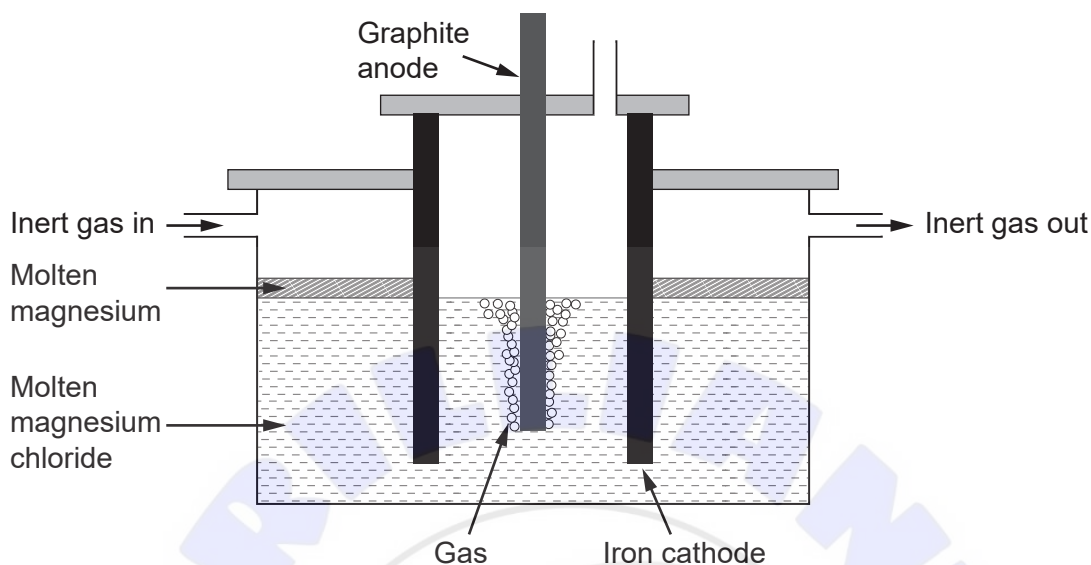
.....
.....

(Option A continues on the following page)



(Option A, question 4 continued)

- (ii) Pure magnesium needed for making alloys can be obtained by electrolysis of molten magnesium chloride.



Write the half-equations for the reactions occurring in this electrolysis.

[2]

Anode:

.....
.....

Cathode:

.....
.....

- (iii) Calculate the theoretical mass of magnesium obtained if a current of 3.00A is used for 10.0 hours. Use charge (Q) = *current* (I) \times *time* (t) and section 2 of the data booklet.

[3]

.....
.....
.....
.....
.....
.....

(Option A continues on the following page)



(Option A, question 4 continued)

- (iv) Suggest a gas which should be continuously passed over the molten magnesium in the electrolytic cell. [1]

.....
.....

- (c) Zeolites can be used as catalysts in the manufacture of CNT. Explain, with reference to their structure, the high selectivity of zeolites. [2]

.....
.....
.....
.....

- (d) Experiments have been done to explore the nematic liquid crystal behaviour of CNT. Justify how CNT molecules could be classified as **nematic**. [1]

.....
.....
.....
.....


End of Option A



Option B — Biochemistry

5. Proteins are polymers of amino acids.

- (a) (i) A paper chromatogram of two amino acids, A1 and A2, is obtained using a non-polar solvent.



Determine the R_f value of A1.

[1]

.....

.....

.....

(Option B continues on the following page)



(Option B, question 5 continued)

- (ii) The mixture is composed of glycine, Gly, and isoleucine, Ile. Their structures can be found in section 33 of the data booklet.

Deduce, referring to relative affinities and R_f , the identity of A1. [2]

.....
.....
.....
.....

- (b) Glycine is one of the amino acids in the primary structure of hemoglobin.

State the type of bonding responsible for the α -helix in the secondary structure. [1]

.....
.....

- (c) Describe how the tertiary structure differs from the quaternary structure in hemoglobin. [2]

.....
.....
.....
.....
.....

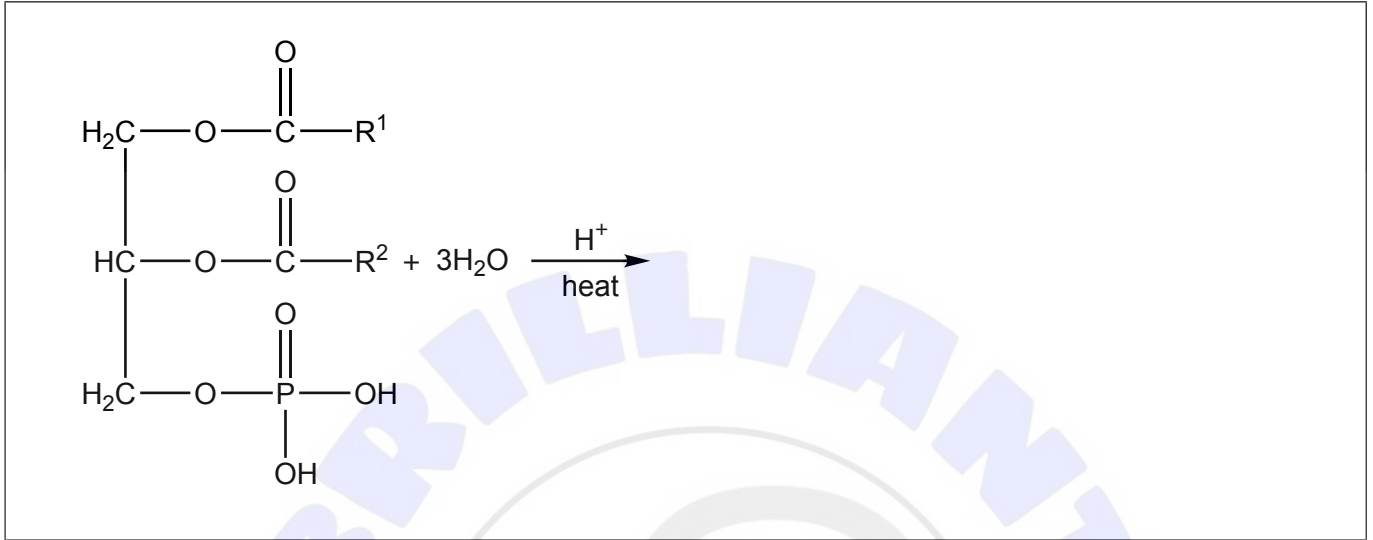
(Option B continues on the following page)



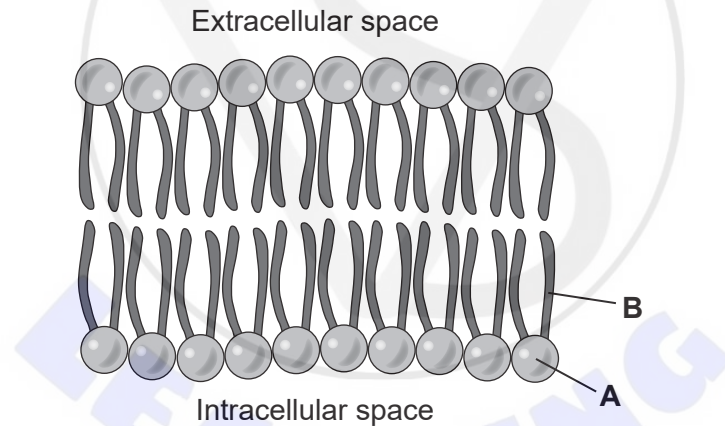
(Option B continued)

6. Phospholipids are a main component of cell membranes.

- (a) Deduce the products of the hydrolysis of a non-substituted phospholipid, where R¹ and R² represent long alkyl chains. [2]



- (b) (i) A representation of a phospholipid bilayer cell membrane is shown:



Identify the components of the phospholipid labelled **A** and **B**.

[1]

A:

.....

B:

.....

(Option B continues on the following page)



(Option B, question 6 continued)

(ii) State the most significant intermolecular forces in the phospholipid in b(i). [2]

Forces occurring between components labelled **A**:

.....

.....

Forces occurring between components labelled **B**:

.....

.....

(c) Phospholipids help maintain cellular environments while fatty acid lipids have important roles in energy storage and electrical insulation. Discuss the structural properties of saturated fats needed for these roles. [2]

Energy storage:

.....

.....

.....

Electrical insulator:

.....

.....

.....

(Option B continues on the following page)



(Option B continued)

7. The diverse functions of biological molecules depend on their structure and shape.

- (a) Classify vitamins A, C and D as either mainly fat- or water-soluble, using section 35 of the data booklet. [1]

Vitamin	Soluble in
A
C
D

- (b) (i) Deduce the straight chain structure of deoxyribose from its ring structure drawn in section 34 of the data booklet. [1]

- (ii) Sucrose is a disaccharide formed in the reaction of glucose with fructose. Identify the reaction type and the newly formed functional group that joins the monosaccharide units in the product. [2]

Reaction type:
.....

Functional group:
.....

(Option B continues on the following page)



(Option B continued)

8. Biomagnification factor, BMF, can be defined as the concentration of a chemical, X, in a predator, relative to the concentration found in its prey.

$$\text{BMF} = \frac{[X]_{\text{predator}}}{[X]_{\text{prey}}}, \text{ where } [X] = (\mu\text{g X per kg body weight})$$

- (a) Calculate the BMF if a 120 kg shark consumes 1000 mackerel in **one** year. Each mackerel weighs 1 kg on average. The $[X]_{\text{mackerel}} = 0.3 \mu\text{g X per kg body weight}$. Assume chemical X remains in the shark's body for **two** years. [2]

.....

.....

.....

.....

- (b) Suggest, with a reason, if fat-soluble or water-soluble xenobiotics would have a larger BMF. [1]

.....

.....

.....

End of Option B



Option C — Energy

9. Gasoline (petrol), biodiesel and ethanol are fuels.

	Gasoline (petrol)	Biodiesel	Ethanol
Chemical structure	Mainly hydrocarbons of chain length C_4-C_{12}	Methyl esters of fatty acids of chain lengths $C_{12}-C_{22}$	CH_3CH_2OH
Energy density / $kJ\ dm^{-3}$	31 800	33 400	21 200

(a) Calculate the energy released, in kJ, from the complete combustion of $5.00\ dm^3$ of ethanol. [1]

.....
.....

(b) State a class of organic compounds found in gasoline. [1]

.....

(c) Outline the advantages and disadvantages of using biodiesel instead of gasoline as fuel for a car. Exclude any discussion of cost. [4]

Advantages:

.....
.....
.....
.....

Disadvantages:

.....
.....
.....
.....

(Option C continues on the following page)



(Option C, question 9 continued)

- (d) A mixture of gasoline and ethanol is often used as a fuel. Suggest an advantage of such a mixture over the use of pure gasoline. Exclude any discussion of cost. [1]

.....

.....

.....

- (e) Contrast the molecular structures of biodiesel and the vegetable oil from which it is formed. [2]

.....

.....

.....

.....

- (f) (i) When combusted, all three fuels can release carbon dioxide, a greenhouse gas, as well as particulates. Contrast how carbon dioxide and particulates interact with sunlight. [1]

.....

.....

- (ii) Methane is another greenhouse gas. Contrast the reasons why methane and carbon dioxide are considered significant greenhouse gases. [2]

.....

.....

.....

.....

.....

(Option C continues on the following page)



(Option C, question 9 continued)

(iii) Suggest a wavenumber absorbed by methane gas. [1]

.....
.....

10. 1.57% of the mass of a rock weighing 46.5 kg is uranium(IV) oxide, UO_2 . 99.28% of the uranium atoms in the rock are uranium-238, ^{238}U .

(a) Show that the mass of the ^{238}U isotope in the rock is 0.639 kg. [2]

.....
.....
.....
.....
.....

(b) The half-life of ^{238}U is 4.46×10^9 years. Calculate the mass of ^{238}U that remains after 0.639 kg has decayed for 2.23×10^{10} years. [2]

.....
.....
.....
.....

(c) Outline a health risk produced by exposure to radioactive decay. [1]

.....
.....
.....

(Option C continues on the following page)



(Option C, question 10 continued)

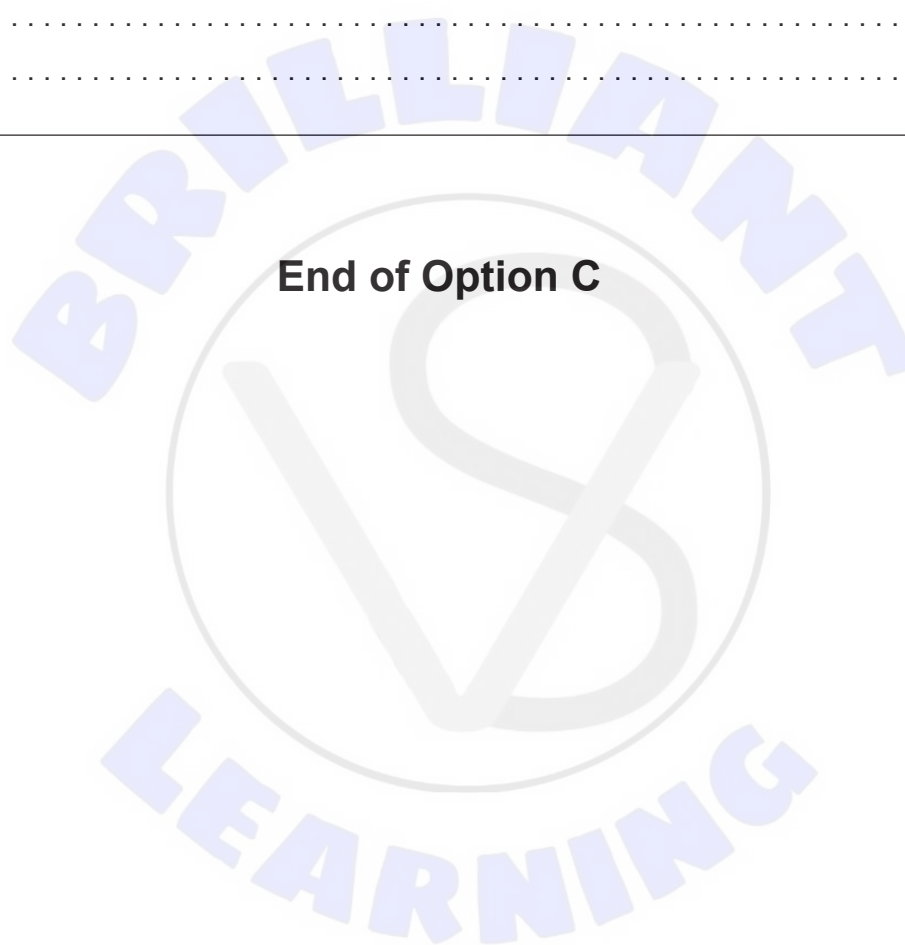
- (d) Deduce the nuclear equation for the decay of uranium-238 to thorium-234. [1]

.....
.....

- (e) Thorium-234 has a higher binding energy per nucleon than uranium-238. Outline what is meant by the binding energy of a nucleus. [1]

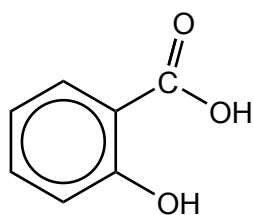
.....
.....

End of Option C

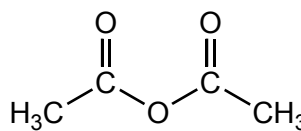


Option D — Medicinal chemistry

11. Aspirin is formed by reacting salicylic acid with ethanoic anhydride. The structure of aspirin is given in section 37 of the data booklet.



Salicylic acid



Ethanoic anhydride

- (a) Deduce the structural formula of the by-product of this reaction. [1]

- (b) Aspirin crystals are rinsed with water after recrystallization to remove impurities. Suggest why **cold** water is used. [1]

.....

.....

- (c) The solubility of aspirin is increased by converting it to an ionic form. Draw the structure of the ionic form of aspirin. [1]

(Option D continues on the following page)



(Option D, question 11 continued)

- (d) Comment on the risk of overdose when taking aspirin as an analgesic, referring to the following values, for a person weighing 70 kg:

Minimum therapeutic dose = 0.5g

Estimated minimum lethal dose = 15g

[1]

.....
.....
.....

12. Consider the following antacids:

	Antacid X	Antacid Y
Active substance	Magnesium hydroxide ($M_r = 58.32$)	Calcium carbonate ($M_r = 100.09$)
Mass of active substance in tablet / g	0.200	0.220

Show that antacid X is more effective, per tablet, than antacid Y.

[3]

.....
.....
.....
.....
.....
.....
.....
.....

(Option D continues on the following page)



(Option D continued)

13. (a) Describe the proper disposal of low-level radioactive waste in hospitals. [2]

.....
.....
.....
.....

(b) Outline a green chemistry solution for problems generated by the use of organic solvents. [1]

.....
.....
.....

14. Consider the structures of medicinal molecules in section 37 of the data booklet.

(a) (i) Name **two** functional groups that both zanamivir and oseltamivir contain. [2]

.....
.....
.....

(ii) Explain how zanamivir works as a preventative agent against flu viruses. [2]

.....
.....
.....
.....
.....

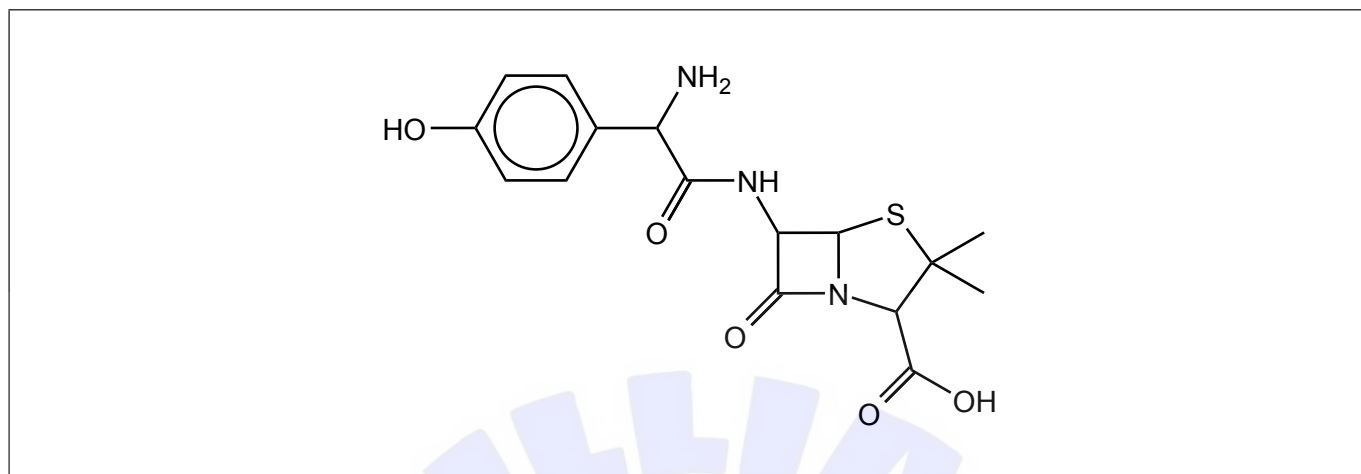
(Option D continues on the following page)



(Option D, question 14 continued)

(b) (i) Circle the side-chain in penicillin on the structure below.

[1]



(ii) Explain, with reference to the action of penicillin, why new penicillins with different side-chains need to be produced.

[2]

.....

.....

.....

.....

.....

(c) (i) State and explain the relative solubility of codeine in water compared to morphine and diamorphine.

[2]

.....

.....

.....

.....

.....

(ii) State the natural source from which codeine, morphine and diamorphine are obtained.

[1]

.....

.....





References:

2. © International Baccalaureate Organization 2020.
- 4.(b)(ii) © International Baccalaureate Organization 2020.
- 5.(a)(i) © International Baccalaureate Organization 2020.
- 6.(b)(i) © International Baccalaureate Organization 2020.
8. Franklin, J., 2015. *How reliable are field-derived biomagnification factors and trophic magnification factors as indicators of bioaccumulation potential? Conclusions from a case study on per- and polyfluoroalkyl substances.* Available at: <https://setac.onlinelibrary.wiley.com/doi/full/10.1002/ieam.1642>.
9. U.S. Department of Energy. <https://afdc.energy.gov/>.





Please **do not** write on this page.

Answers written on this page
will not be marked.





Please **do not** write on this page.

Answers written on this page
will not be marked.

