

© International Baccalaureate Organization 2021

All rights reserved. No part of this product may be reproduced in any form or by any electronic or mechanical means, including information storage and retrieval systems, without the prior written permission from the IB. Additionally, the license tied with this product prohibits use of any selected files or extracts from this product. Use by third parties, including but not limited to publishers, private teachers, tutoring or study services, preparatory schools, vendors operating curriculum mapping services or teacher resource digital platforms and app developers, whether fee-covered or not, is prohibited and is a criminal offense.

More information on how to request written permission in the form of a license can be obtained from <https://ibo.org/become-an-ib-school/ib-publishing/licensing/applying-for-a-license/>.

© Organisation du Baccalauréat International 2021

Tous droits réservés. Aucune partie de ce produit ne peut être reproduite sous quelque forme ni par quelque moyen que ce soit, électronique ou mécanique, y compris des systèmes de stockage et de récupération d'informations, sans l'autorisation écrite préalable de l'IB. De plus, la licence associée à ce produit interdit toute utilisation de tout fichier ou extrait sélectionné dans ce produit. L'utilisation par des tiers, y compris, sans toutefois s'y limiter, des éditeurs, des professeurs particuliers, des services de tutorat ou d'aide aux études, des établissements de préparation à l'enseignement supérieur, des fournisseurs de services de planification des programmes d'études, des gestionnaires de plateformes pédagogiques en ligne, et des développeurs d'applications, moyennant paiement ou non, est interdite et constitue une infraction pénale.

Pour plus d'informations sur la procédure à suivre pour obtenir une autorisation écrite sous la forme d'une licence, rendez-vous à l'adresse <https://ibo.org/become-an-ib-school/ib-publishing/licensing/applying-for-a-license/>.

© Organización del Bachillerato Internacional, 2021

Todos los derechos reservados. No se podrá reproducir ninguna parte de este producto de ninguna forma ni por ningún medio electrónico o mecánico, incluidos los sistemas de almacenamiento y recuperación de información, sin la previa autorización por escrito del IB. Además, la licencia vinculada a este producto prohíbe el uso de todo archivo o fragmento seleccionado de este producto. El uso por parte de terceros —lo que incluye, a título enunciativo, editoriales, profesores particulares, servicios de apoyo académico o ayuda para el estudio, colegios preparatorios, desarrolladores de aplicaciones y entidades que presten servicios de planificación curricular u ofrezcan recursos para docentes mediante plataformas digitales—, ya sea incluido en tasas o no, está prohibido y constituye un delito.

En este enlace encontrará más información sobre cómo solicitar una autorización por escrito en forma de licencia: <https://ibo.org/become-an-ib-school/ib-publishing/licensing/applying-for-a-license/>.

Mathematics: analysis and approaches
Standard level
Paper 1

Monday 1 November 2021 (afternoon)

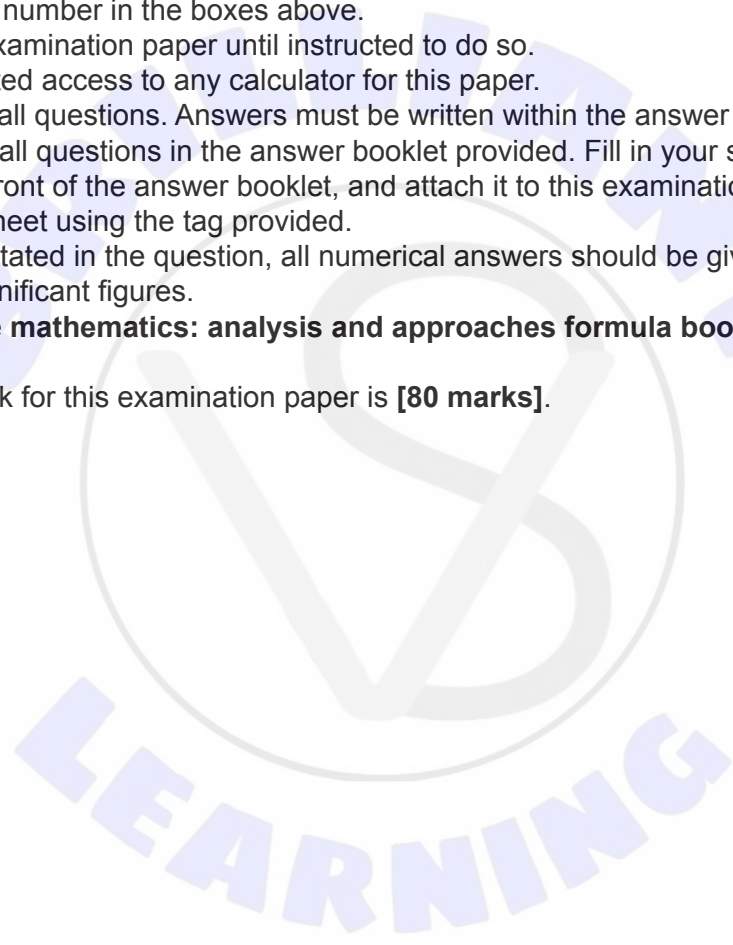
Candidate session number

--	--	--	--	--	--	--	--	--	--

1 hour 30 minutes

Instructions to candidates

- Write your session number in the boxes above.
- Do not open this examination paper until instructed to do so.
- You are not permitted access to any calculator for this paper.
- Section A: answer all questions. Answers must be written within the answer boxes provided.
- Section B: answer all questions in the answer booklet provided. Fill in your session number on the front of the answer booklet, and attach it to this examination paper and your cover sheet using the tag provided.
- Unless otherwise stated in the question, all numerical answers should be given exactly or correct to three significant figures.
- A clean copy of the **mathematics: analysis and approaches formula booklet** is required for this paper.
- The maximum mark for this examination paper is **[80 marks]**.



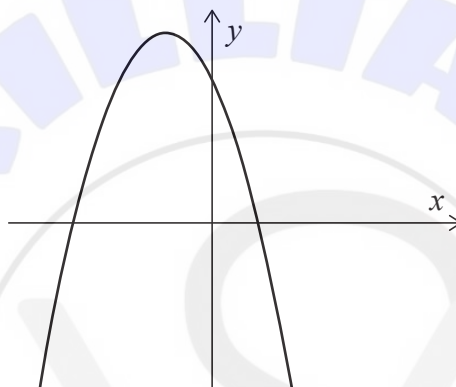
Full marks are not necessarily awarded for a correct answer with no working. Answers must be supported by working and/or explanations. Where an answer is incorrect, some marks may be given for a correct method, provided this is shown by written working. You are therefore advised to show all working.

Section A

Answer **all** questions. Answers must be written within the answer boxes provided. Working may be continued below the lines, if necessary.

1. [Maximum mark: 7]

Consider the function $f(x) = -2(x - 1)(x + 3)$, for $x \in \mathbb{R}$. The following diagram shows part of the graph of f .



- (a) For the graph of f
 - (i) find the x -coordinates of the x -intercepts;
 - (ii) find the coordinates of the vertex. [5]

The function f can be written in the form $f(x) = -2(x - h)^2 + k$.

- (b) Write down the value of h and the value of k . [2]

.....

.....

.....

.....

.....

.....

.....

.....

.....

.....



3. [Maximum mark: 5]

The function f is defined by $f(x) = \frac{2x+4}{3-x}$, where $x \in \mathbb{R}$, $x \neq 3$.

- (a) Write down the equation of
 - (i) the vertical asymptote of the graph of f ;
 - (ii) the horizontal asymptote of the graph of f . [2]

- (b) Find the coordinates where the graph of f crosses
 - (i) the x -axis;
 - (ii) the y -axis. [2]

BRILLIANT LEARNING

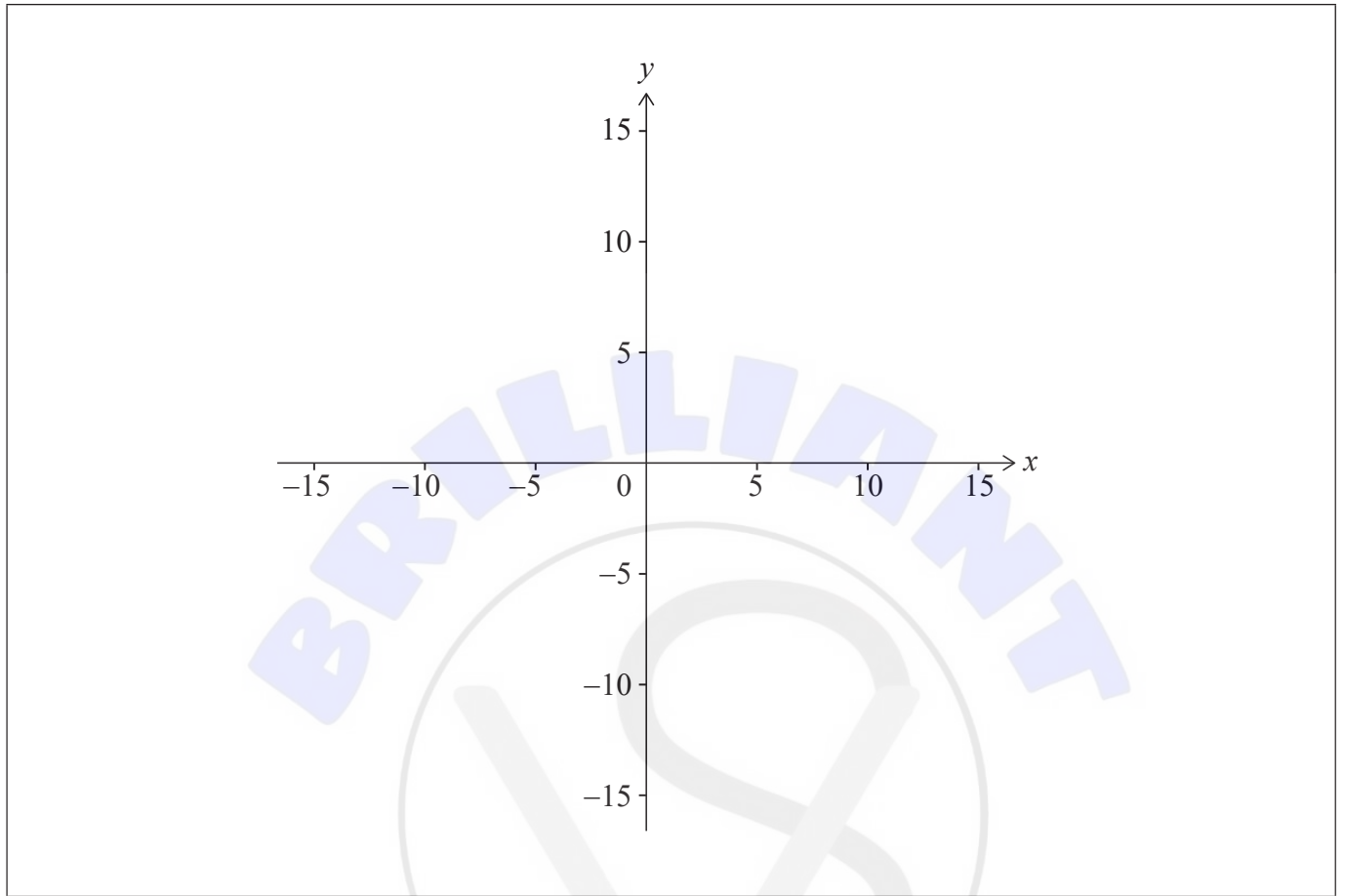
(This question continues on the following page)



(Question 3 continued)

(c) Sketch the graph of f on the axes below.

[1]



Do **not** write solutions on this page.

Section B

Answer **all** questions in the answer booklet provided. Please start each question on a new page.

7. [Maximum mark: 16]

A particle P moves along the x -axis. The velocity of P is $v \text{ m s}^{-1}$ at time t seconds, where $v(t) = 4 + 4t - 3t^2$ for $0 \leq t \leq 3$. When $t = 0$, P is at the origin O .

- (a) (i) Find the value of t when P reaches its maximum velocity. [7]
- (ii) Show that the distance of P from O at this time is $\frac{88}{27}$ metres. [7]
- (b) Sketch a graph of v against t , clearly showing any points of intersection with the axes. [4]
- (c) Find the total distance travelled by P . [5]

8. [Maximum mark: 15]

Consider the function $f(x) = a^x$ where $x, a \in \mathbb{R}$ and $x > 0, a > 1$.

The graph of f contains the point $\left(\frac{2}{3}, 4\right)$.

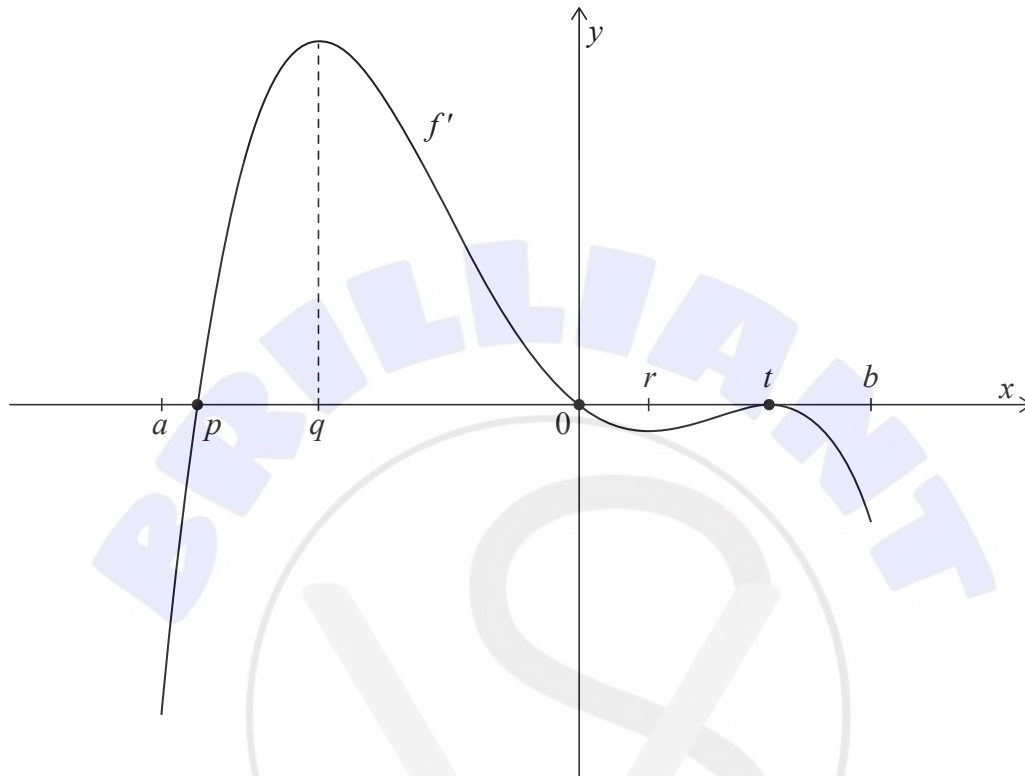
- (a) Show that $a = 8$. [2]
- (b) Write down an expression for $f^{-1}(x)$. [1]
- (c) Find the value of $f^{-1}(\sqrt{32})$. [3]
- (d) Consider the arithmetic sequence $\log_8 27, \log_8 p, \log_8 q, \log_8 125$, where $p > 1$ and $q > 1$.
 - (i) Show that $27, p, q$ and 125 are four consecutive terms in a geometric sequence. [9]
 - (ii) Find the value of p and the value of q . [9]



Do **not** write solutions on this page.

9. [Maximum mark: 14]

Consider a function f with domain $a < x < b$. The following diagram shows the graph of f' , the derivative of f .



The graph of f' , the derivative of f , has x -intercepts at $x = p$, $x = 0$ and $x = t$. There are local maximum points at $x = q$ and $x = t$ and a local minimum point at $x = r$.

- (a) Find all the values of x where the graph of f is increasing. Justify your answer. [2]
 - (b) Find the value of x where the graph of f has a local maximum. [1]
 - (c) (i) Find the value of x where the graph of f has a local minimum. Justify your answer.
 - (ii) Find the values of x where the graph of f has points of inflexion. Justify your answer. [5]
 - (d) The total area of the region enclosed by the graph of f' , the derivative of f , and the x -axis is 20. [6]
- Given that $f(p) + f(t) = 4$, find the value of $f(0)$.

References:





Please **do not** write on this page.

Answers written on this page
will not be marked.





Please **do not** write on this page.

Answers written on this page
will not be marked.

