

© International Baccalaureate Organization 2021

All rights reserved. No part of this product may be reproduced in any form or by any electronic or mechanical means, including information storage and retrieval systems, without the prior written permission from the IB. Additionally, the license tied with this product prohibits use of any selected files or extracts from this product. Use by third parties, including but not limited to publishers, private teachers, tutoring or study services, preparatory schools, vendors operating curriculum mapping services or teacher resource digital platforms and app developers, whether fee-covered or not, is prohibited and is a criminal offense.

More information on how to request written permission in the form of a license can be obtained from <https://ibo.org/become-an-ib-school/ib-publishing/licensing/applying-for-a-license/>.

© Organisation du Baccalauréat International 2021

Tous droits réservés. Aucune partie de ce produit ne peut être reproduite sous quelque forme ni par quelque moyen que ce soit, électronique ou mécanique, y compris des systèmes de stockage et de récupération d'informations, sans l'autorisation écrite préalable de l'IB. De plus, la licence associée à ce produit interdit toute utilisation de tout fichier ou extrait sélectionné dans ce produit. L'utilisation par des tiers, y compris, sans toutefois s'y limiter, des éditeurs, des professeurs particuliers, des services de tutorat ou d'aide aux études, des établissements de préparation à l'enseignement supérieur, des fournisseurs de services de planification des programmes d'études, des gestionnaires de plateformes pédagogiques en ligne, et des développeurs d'applications, moyennant paiement ou non, est interdite et constitue une infraction pénale.

Pour plus d'informations sur la procédure à suivre pour obtenir une autorisation écrite sous la forme d'une licence, rendez-vous à l'adresse <https://ibo.org/become-an-ib-school/ib-publishing/licensing/applying-for-a-license/>.

© Organización del Bachillerato Internacional, 2021

Todos los derechos reservados. No se podrá reproducir ninguna parte de este producto de ninguna forma ni por ningún medio electrónico o mecánico, incluidos los sistemas de almacenamiento y recuperación de información, sin la previa autorización por escrito del IB. Además, la licencia vinculada a este producto prohíbe el uso de todo archivo o fragmento seleccionado de este producto. El uso por parte de terceros —lo que incluye, a título enunciativo, editoriales, profesores particulares, servicios de apoyo académico o ayuda para el estudio, colegios preparatorios, desarrolladores de aplicaciones y entidades que presten servicios de planificación curricular u ofrezcan recursos para docentes mediante plataformas digitales—, ya sea incluido en tasas o no, está prohibido y constituye un delito.

En este enlace encontrará más información sobre cómo solicitar una autorización por escrito en forma de licencia: <https://ibo.org/become-an-ib-school/ib-publishing/licensing/applying-for-a-license/>.

**Physics**  
**Standard level**  
**Paper 1**

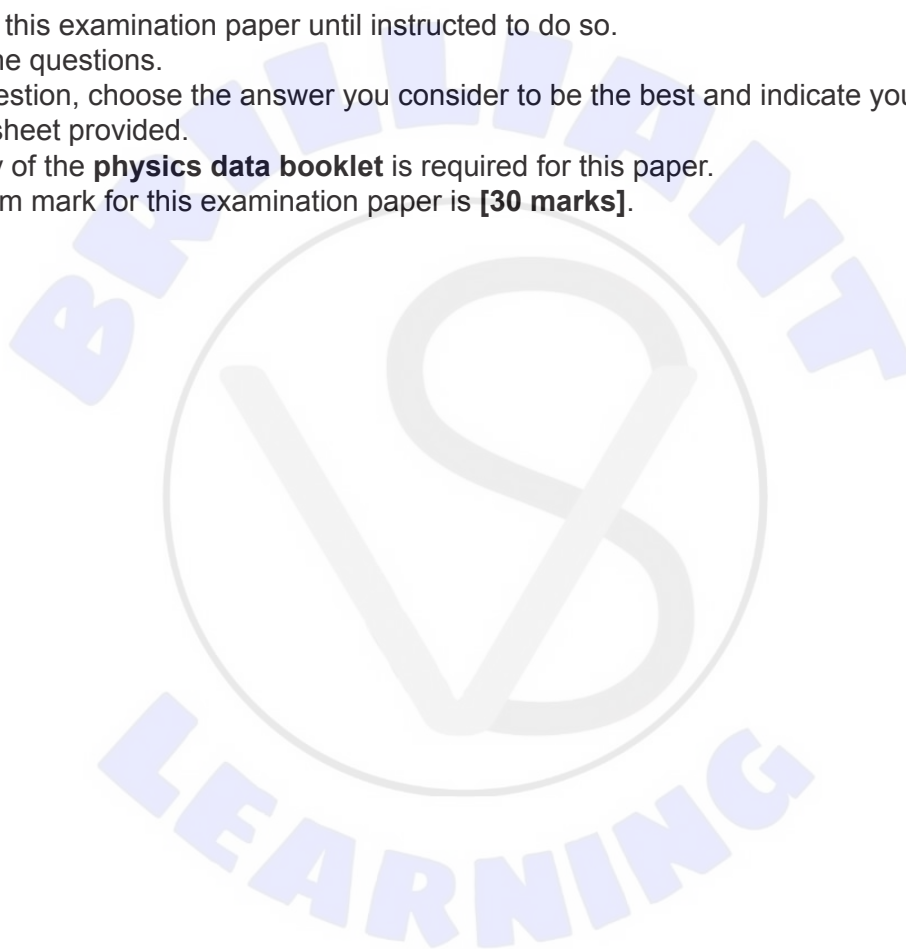
Thursday 4 November 2021 (afternoon)

45 minutes

---

**Instructions to candidates**

- Do not open this examination paper until instructed to do so.
- Answer all the questions.
- For each question, choose the answer you consider to be the best and indicate your choice on the answer sheet provided.
- A clean copy of the **physics data booklet** is required for this paper.
- The maximum mark for this examination paper is **[30 marks]**.



1. Which is a vector quantity?

- A. Acceleration
- B. Energy
- C. Pressure
- D. Speed

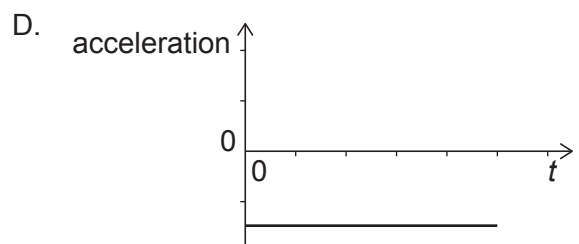
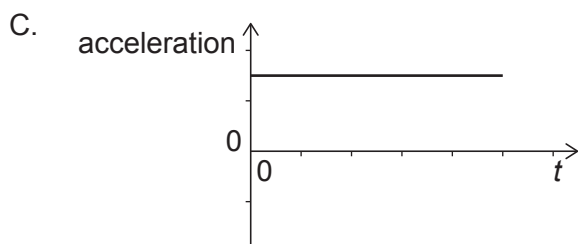
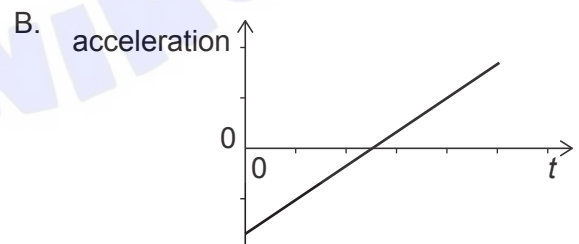
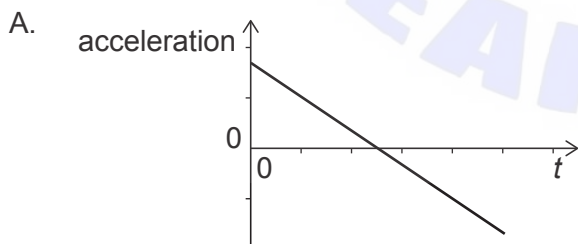
2. A ball of mass  $(50 \pm 1)$ g is moving with a speed of  $(25 \pm 1)$ ms<sup>-1</sup>. What is the fractional uncertainty in the momentum of the ball?

- A. 0.02
- B. 0.04
- C. 0.06
- D. 0.08

3. The graph shows the variation with time  $t$  of the velocity of an object.



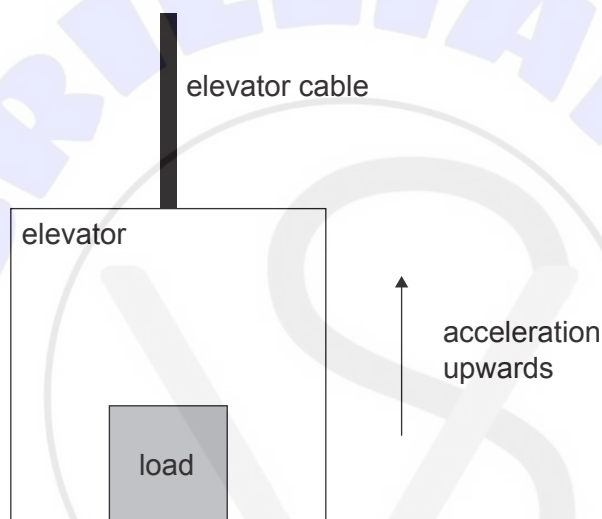
What is the variation with time  $t$  of the acceleration of the object?



4. A ball is thrown vertically downwards with an initial speed of  $4.0 \text{ m s}^{-1}$ . The ball hits the ground with a speed of  $16 \text{ m s}^{-1}$ . Air resistance is negligible. What is the time of fall and what is the distance travelled by the ball?

	Time of fall/s	Distance/m
A.	1.0	10
B.	1.0	12
C.	1.2	10
D.	1.2	12

5. An elevator (lift) and its load accelerate vertically upwards.

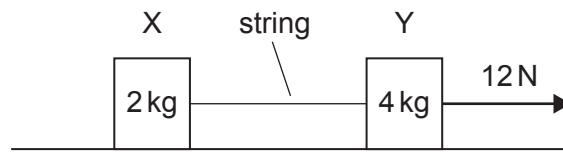


Which statement is correct in this situation?

- A. The net force on the load is zero.
- B. The tension in the cable is equal but opposite to the combined weight of the elevator and its load.
- C. The normal reaction force on the load is equal but opposite to the force on the elevator from the load.
- D. The elevator and its load are in translational equilibrium.

Turn over


6. X and Y are two objects on a frictionless table connected by a string. The mass of X is 2 kg and the mass of Y is 4 kg. The mass of the string is negligible. A constant horizontal force of 12 N acts on Y.



What are the acceleration of Y and the magnitude of the tension in the string?

	Acceleration of Y/ $\text{ms}^{-2}$	Tension in the string/N
A.	2	4
B.	2	6
C.	3	4
D.	3	6

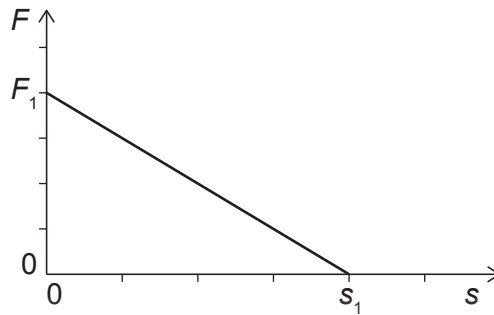
7. An object of mass 1.0 kg hangs at rest from a spring. The spring has a negligible mass and the spring constant  $k$  is  $20 \text{ N m}^{-1}$



What is the elastic potential energy stored in the spring?

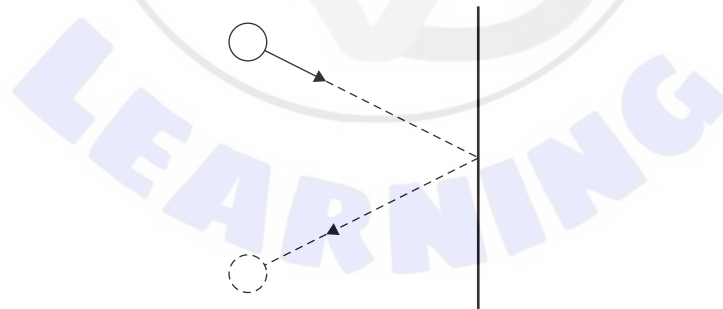
- A. 1.0 J
- B. 2.5 J
- C. 5.0 J
- D. 10 J

8. A net force  $F$  acts on an object of mass  $m$  that is initially at rest. The object moves in a straight line. The variation of  $F$  with the distance  $s$  is shown.

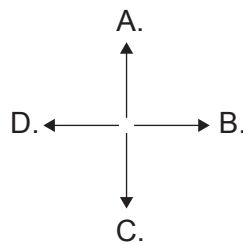


What is the speed of the object at the distance  $s_1$ ?

- A.  $\sqrt{\frac{F_1 s_1}{2m}}$   
B.  $\sqrt{\frac{F_1 s_1}{m}}$   
C.  $\sqrt{\frac{2F_1 s_1}{m}}$   
D.  $\sqrt{\frac{4F_1 s_1}{m}}$
9. A ball rolls on the floor towards a wall and rebounds with the same speed and at the same angle to the wall.



What is the direction of the impulse applied to the ball by the wall?



Turn over

10. A liquid is vaporized to a gas at a constant temperature.

Three quantities of the substance are the

- I. total intermolecular potential energy
- II. root mean square speed of the molecules
- III. average distance between the molecules.

Which quantities are **greater** for the substance in the gas phase compared to the liquid phase?

- A. I and II only
  - B. I and III only
  - C. II and III only
  - D. I, II and III
11. A mass  $m$  of a liquid of specific heat capacity  $c$  flows every second through a heater of power  $P$ . What is the difference in temperature between the liquid entering and leaving the heater?
- A.  $\frac{mc}{P}$
  - B.  $273 + \frac{mc}{P}$
  - C.  $\frac{P}{mc}$
  - D.  $273 + \frac{P}{mc}$
12. A fixed mass of an ideal gas has a volume of  $V$ , a pressure of  $p$  and a temperature of  $30^\circ\text{C}$ . The gas is compressed to the volume of  $\frac{V}{6}$  and its pressure increases to  $12p$ . What is the new temperature of the gas?
- A.  $15^\circ\text{C}$
  - B.  $60^\circ\text{C}$
  - C.  $333^\circ\text{C}$
  - D.  $606^\circ\text{C}$

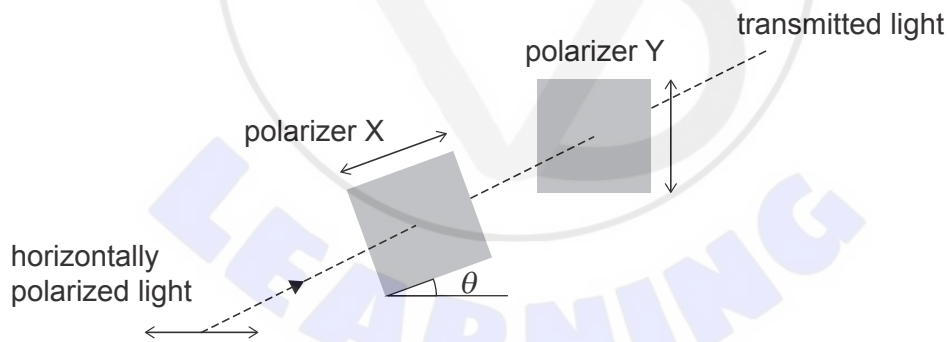
13. A particle undergoes simple harmonic motion of amplitude  $x_0$  and frequency  $f$ . What is the average speed of the particle during one oscillation?

- A. 0
- B.  $fx_0$
- C.  $2fx_0$
- D.  $4fx_0$

14. A travelling wave on the surface of a lake has wavelength  $\lambda$ . Two points along the wave oscillate with the phase difference of  $\pi$ . What is the smallest possible distance between these two points?

- A.  $\frac{\lambda}{4}$
- B.  $\frac{\lambda}{2}$
- C.  $\lambda$
- D.  $2\lambda$

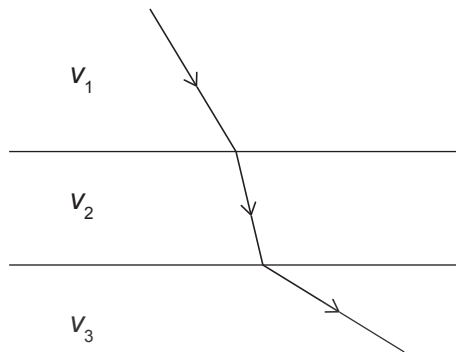
15. Horizontally polarized light is incident on a pair of polarizers X and Y. The axis of polarization of X makes an angle  $\theta$  with the horizontal. The axis of polarization of Y is vertical.



What is  $\theta$  so that the intensity of the light transmitted through Y is a maximum?

- A.  $0^\circ$
- B.  $45^\circ$
- C.  $90^\circ$
- D.  $180^\circ$

16. A ray of monochromatic light is incident on the parallel interfaces between three media. The speeds of light in the media are  $v_1$ ,  $v_2$  and  $v_3$ .



What is correct about the speeds of light in the media?

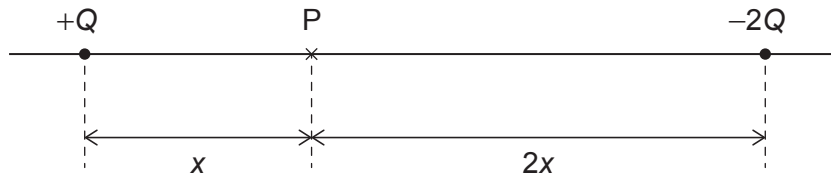
- A.  $v_3 < v_1 < v_2$
  - B.  $v_3 < v_2 < v_1$
  - C.  $v_2 < v_3 < v_1$
  - D.  $v_2 < v_1 < v_3$
17. A string is fixed at both ends. P and Q are two particles on the string.



The first harmonic standing wave is formed in the string. What is correct about the motion of P and Q?

- A. P is a node and Q is an antinode.
- B. P is an antinode and Q is a node.
- C. P and Q oscillate with the same amplitude.
- D. P and Q oscillate with the same frequency.

18. A charge  $+Q$  and a charge  $-2Q$  are a distance  $3x$  apart. Point P is on the line joining the charges, at a distance  $x$  from  $+Q$ .



The magnitude of the electric field produced at P by the charge  $+Q$  alone is  $E$ .

What is the total electric field at P?

- A.  $\frac{E}{2}$  to the right
  - B.  $\frac{E}{2}$  to the left
  - C.  $\frac{3E}{2}$  to the right
  - D.  $\frac{3E}{2}$  to the left
19. Two wires, X and Y, are made of the same material and have equal length. The diameter of X is twice that of Y.

What is  $\frac{\text{resistance of X}}{\text{resistance of Y}}$  ?

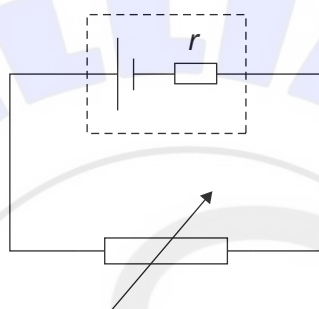
- A.  $\frac{1}{4}$
- B.  $\frac{1}{2}$
- C. 2
- D. 4

Turn over

20. An electric motor of efficiency 0.75 is connected to a power supply with an emf of 20V and negligible internal resistance. The power output of the motor is 120 W. What is the average current drawn from the power supply?

- A. 3.1A
- B. 4.5A
- C. 6.0A
- D. 8.0A

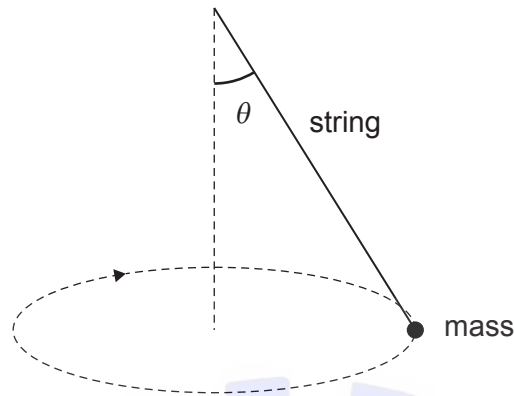
21. A variable resistor is connected in series to a cell with internal resistance  $r$  as shown.



The resistance of the variable resistor is increased. What happens to the power dissipated in the cell and to the terminal potential difference of the cell?

	Power dissipated in the cell	Terminal potential difference of the cell
A.	decreases	increases
B.	increases	increases
C.	decreases	decreases
D.	increases	decreases

22. A mass at the end of a string is moving in a horizontal circle at constant speed. The string makes an angle  $\theta$  to the vertical.



What is the magnitude of the acceleration of the mass?

- A.  $g$
  - B.  $g \sin \theta$
  - C.  $g \cos \theta$
  - D.  $g \tan \theta$
23. The gravitational field strength at the surface of a planet of radius  $R$  is  $g$ . A satellite is moving in a circular orbit a distance  $R$  above the surface of the planet. What is the magnitude of the acceleration of the satellite?
- A. 0
  - B.  $\frac{g}{4}$
  - C.  $\frac{g}{2}$
  - D.  $g$
24. A pure sample of radioactive nuclide X decays into a stable nuclide Y.

What is  $\frac{\text{number of atoms of Y}}{\text{number of atoms of X}}$  after two half-lives?

- A. 1
- B. 2
- C. 3
- D. 4

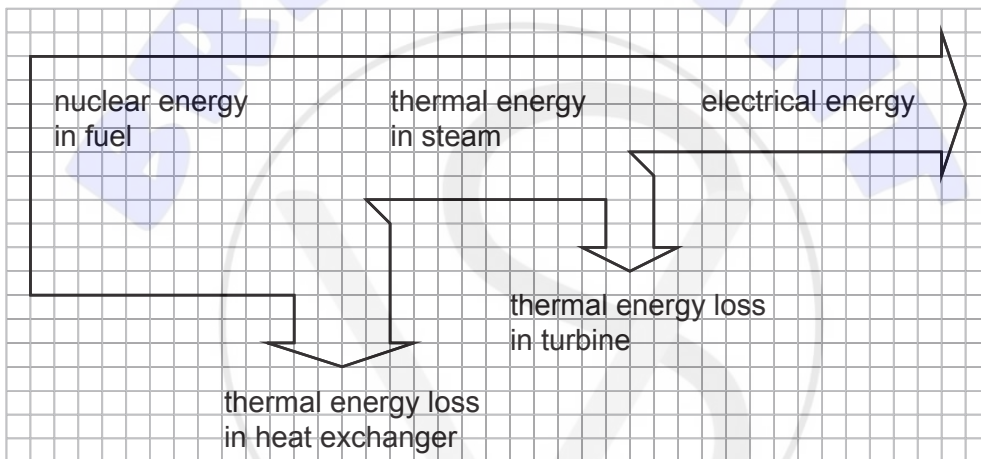
Turn over

25. The mass of a nucleus of iron-56 ( ${}^{56}_{26}\text{Fe}$ ) is  $M$ .  
What is the mass defect of the nucleus of iron-56?
- A.  $M - 26m_p - 56m_n$
  - B.  $26m_p + 30m_n - M$
  - C.  $M - 26m_p - 56m_n - 26m_e$
  - D.  $26m_p + 30m_n + 26m_e - M$
26. A proton collides with an electron. What are the possible products of the collision?
- A. Two neutrons
  - B. Neutron and positron
  - C. Neutron and antineutrino
  - D. Neutron and neutrino
27. The Higgs boson was discovered in the Large Hadron Collider at CERN. Which statements are correct about the discovery of the Higgs boson?
- I. It was independent of previous theoretical work.
  - II. It involved analysing large amounts of experimental data.
  - III. It was consistent with the standard model of particle physics.
- A. I and II only
  - B. I and III only
  - C. II and III only
  - D. I, II and III

28. A fuel has mass density  $\rho$  and energy density  $u$ . What mass of the fuel has to be burned to release thermal energy  $E$ ?

- A.  $\frac{\rho E}{u}$
- B.  $\frac{u E}{\rho}$
- C.  $\frac{\rho u}{E}$
- D.  $\rho u E$

29. The Sankey diagram shows the energy transfers in a nuclear power station.



Electrical power output of the power station is 1000 MW.

What is the thermal power loss in the heat exchanger?

- A. 500 MW
- B. 1000 MW
- C. 1500 MW
- D. 2500 MW

30. Which is correct for a black-body radiator?
- A. The power it emits from a unit surface area depends on the temperature only.
  - B. It has an albedo of 1.
  - C. It emits monochromatic radiation whose wavelength depends on the temperature only.
  - D. It emits radiation of equal intensity at all wavelengths.
- 



**References:**

© International Baccalaureate Organization 2021