

© International Baccalaureate Organization 2023

All rights reserved. No part of this product may be reproduced in any form or by any electronic or mechanical means, including information storage and retrieval systems, without the prior written permission from the IB. Additionally, the license tied with this product prohibits use of any selected files or extracts from this product. Use by third parties, including but not limited to publishers, private teachers, tutoring or study services, preparatory schools, vendors operating curriculum mapping services or teacher resource digital platforms and app developers, whether fee-covered or not, is prohibited and is a criminal offense.

More information on how to request written permission in the form of a license can be obtained from <https://ibo.org/become-an-ib-school/ib-publishing/licensing/applying-for-a-license/>.

© Organisation du Baccalauréat International 2023

Tous droits réservés. Aucune partie de ce produit ne peut être reproduite sous quelque forme ni par quelque moyen que ce soit, électronique ou mécanique, y compris des systèmes de stockage et de récupération d'informations, sans l'autorisation écrite préalable de l'IB. De plus, la licence associée à ce produit interdit toute utilisation de tout fichier ou extrait sélectionné dans ce produit. L'utilisation par des tiers, y compris, sans toutefois s'y limiter, des éditeurs, des professeurs particuliers, des services de tutorat ou d'aide aux études, des établissements de préparation à l'enseignement supérieur, des fournisseurs de services de planification des programmes d'études, des gestionnaires de plateformes pédagogiques en ligne, et des développeurs d'applications, moyennant paiement ou non, est interdite et constitue une infraction pénale.

Pour plus d'informations sur la procédure à suivre pour obtenir une autorisation écrite sous la forme d'une licence, rendez-vous à l'adresse <https://ibo.org/become-an-ib-school/ib-publishing/licensing/applying-for-a-license/>.

© Organización del Bachillerato Internacional, 2023

Todos los derechos reservados. No se podrá reproducir ninguna parte de este producto de ninguna forma ni por ningún medio electrónico o mecánico, incluidos los sistemas de almacenamiento y recuperación de información, sin la previa autorización por escrito del IB. Además, la licencia vinculada a este producto prohíbe el uso de todo archivo o fragmento seleccionado de este producto. El uso por parte de terceros —lo que incluye, a título enunciativo, editoriales, profesores particulares, servicios de apoyo académico o ayuda para el estudio, colegios preparatorios, desarrolladores de aplicaciones y entidades que presten servicios de planificación curricular u ofrezcan recursos para docentes mediante plataformas digitales—, ya sea incluido en tasas o no, está prohibido y constituye un delito.

En este enlace encontrará más información sobre cómo solicitar una autorización por escrito en forma de licencia: <https://ibo.org/become-an-ib-school/ib-publishing/licensing/applying-for-a-license/>.

Mathematics: analysis and approaches
Standard level
Paper 2

31 October 2023

Zone A afternoon | **Zone B** afternoon | **Zone C** afternoon

Candidate session number

1 hour 30 minutes

--	--	--	--	--	--	--	--	--	--

Instructions to candidates

- Write your session number in the boxes above.
- Do not open this examination paper until instructed to do so.
- A graphic display calculator is required for this paper.
- Section A: answer all questions. Answers must be written within the answer boxes provided.
- Section B: answer all questions in the answer booklet provided. Fill in your session number on the front of the answer booklet, and attach it to this examination paper and your cover sheet using the tag provided.
- Unless otherwise stated in the question, all numerical answers should be given exactly or correct to three significant figures.
- A clean copy of the **mathematics: analysis and approaches formula booklet** is required for this paper.
- The maximum mark for this examination paper is **[80 marks]**.

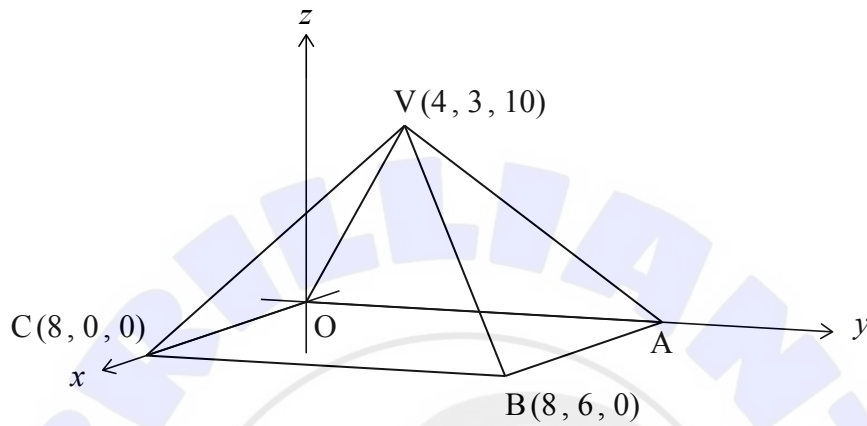


2. [Maximum mark: 6]

The following diagram shows a pyramid with vertex V and rectangular base $OABC$.

Point B has coordinates $(8, 6, 0)$, point C has coordinates $(8, 0, 0)$ and point V has coordinates $(4, 3, 10)$.

diagram not to scale



(a) Find BV .

[2]

(b) Find the size of \hat{BVC} .

[4]

.....

.....

.....

.....

.....

.....

.....

.....

.....

.....

.....

.....

.....

.....

.....

.....

.....

.....

.....

.....

.....

.....

.....

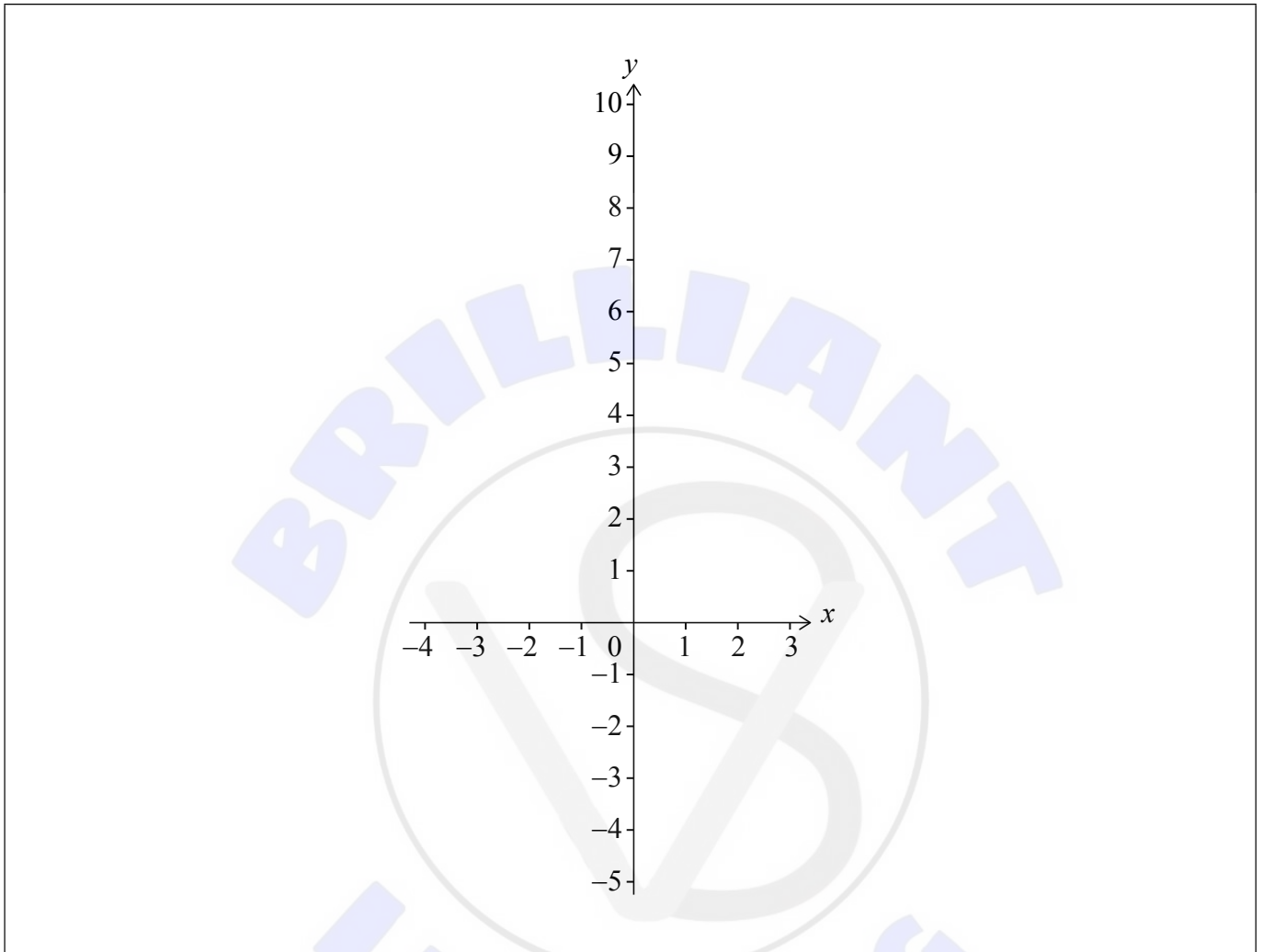


3. [Maximum mark: 5]

Consider the function $f(x) = e^x - 2x - 5$.

(a) On the following axes, sketch the graph of f for $-4 \leq x \leq 3$.

[3]



The function g is defined by $g(x) = e^{3x} - 6x - 7$.

(b) The graph of g is obtained from the graph of f by a horizontal stretch with scale factor k , followed by a vertical translation of c units.

Find the value of k and the value of c .


[2]

(This question continues on the following page)



4. [Maximum mark: 7]

A company is designing a new logo in the shape of a letter "C".



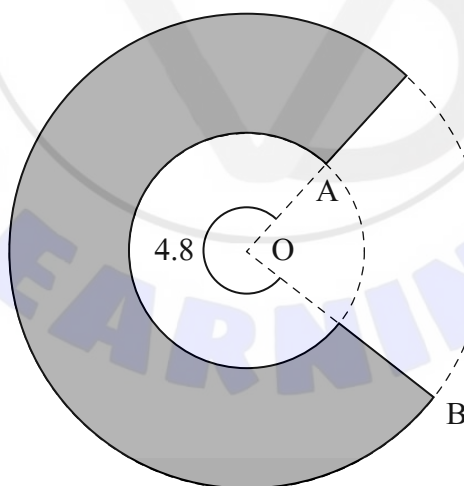
The letter "C" is formed between two circles with centre O.

The point A lies on the circumference of the inner circle with radius r cm, where $r < 10$.

The point B lies on the circumference of the outer circle with radius 10 cm.

The reflex angle \widehat{AOB} is 4.8 radians. The letter "C" is shown by the shaded area in the following diagram.

diagram not to scale



(This question continues on the following page)



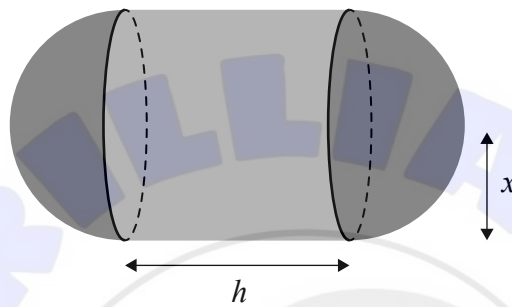
Do **not** write solutions on this page.

Section B

Answer **all** questions in the answer booklet provided. Please start each question on a new page.

7. [Maximum mark: 14]

The solid shown in the following diagram is comprised of a cylinder and two hemispheres. The cylinder has height h cm and radius x cm. The hemispheres fit exactly onto either end of the cylinder.



The volume of the cylinder is 41 cm^3 .

(a) Show that the total surface area, $S \text{ cm}^2$, of the solid is given by $S = \frac{82}{x} + 4\pi x^2$. [3]

The total surface area of the solid has a local maximum or a local minimum value when $x = a$.

(b) (i) Find an expression for $\frac{dS}{dx}$.
 (ii) Hence, find the **exact** value of a . [5]

(c) (i) Find an expression for $\frac{d^2S}{dx^2}$.
 (ii) Use the second derivative of S to justify that S is a minimum when $x = a$.
 (iii) Find the minimum surface area of the solid. [6]



Do **not** write solutions on this page.

8. [Maximum mark: 15]

Give your answers to parts (a)(ii), (c)(i) and (d) correct to two decimal places.

Daniela and Sorin have each recently received some money. Daniela won a cash prize and Sorin received an inheritance.

Daniela had two options to choose from to receive her winnings. In both options she receives a payment on the first day of each month for three years.

Option A Each payment is \$4200.

Option B The first payment is \$1500. In each month which follows, the payment is 4% more than the previous month.

(a) Find the total amount Daniela would receive if she chooses

(i) Option A;

(ii) Option B.

[5]

Sorin received an inheritance of \$160 000. Sorin invested his inheritance in an account that pays a nominal annual interest rate of 5% per annum, compounded monthly. The interest is added on the last day of each month.

(b) Write down an expression for the value of Sorin's investment after n years.

[1]

Daniela chose Option B and received her first payment on 1st January 2023. Sorin invested his inheritance on the same day.

(c) (i) Find the **total** value of Daniela's winnings and Sorin's investment on the last day of the sixth month.

(ii) Find the minimum number of complete months before the total value of Daniela's winnings and Sorin's investment is at least \$257 000.

[6]

At the end of the three years, Daniela invested \$30 000 for a further six years in a second account that pays a nominal interest rate of $r\%$ per annum compounded quarterly.

(d) Find the value of r if this investment grows to \$41 000 after six years.

[3]



Do **not** write solutions on this page.

9. [Maximum mark: 16]

A farmer is growing a field of rice plants. The height, H cm, of each plant can be modelled by a normal distribution with mean μ and standard deviation σ .

It is known that $P(H < 82.4) = 0.213$ and $P(H > 87.3) = 0.409$.

(a) Find the probability that the height of a randomly selected plant is between 82.4 cm and 87.3 cm. [2]

(b) Find the value of μ and the value of σ . [5]

The farmer measures 100 randomly selected plants. Any plant with a height greater than 87.3 cm is considered ready to harvest. Heights of plants are independent of each other.

(c) (i) Find the probability that exactly 32 plants are ready to harvest.
(ii) Given that fewer than 44 plants are ready to harvest, find the probability that exactly 32 plants are ready to harvest. [6]

In another field, the farmer is growing the same variety of rice, but is using a different fertilizer. The heights of these plants, F cm, are normally distributed with mean 92.8 and standard deviation d . The farmer finds the interquartile range to be 4.52 cm.

(d) Find the value of d . [3]

